



# PERIMETER OF TRIANGLES

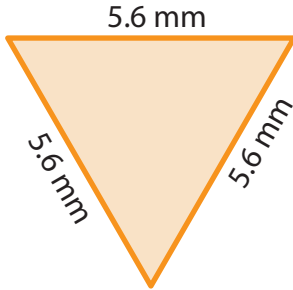
Name \_\_\_\_\_

Score \_\_\_\_\_

PT:12

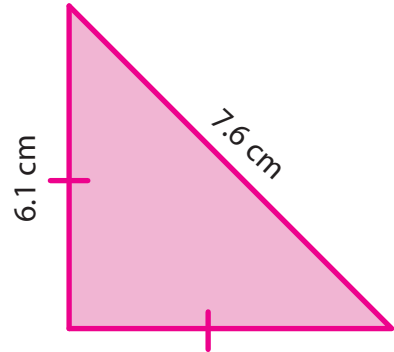
Find the perimeter of each triangle.

1)



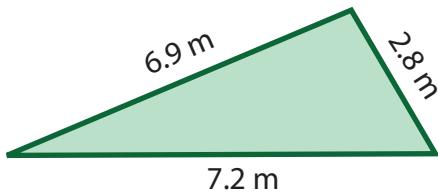
Perimeter = \_\_\_\_\_

2)



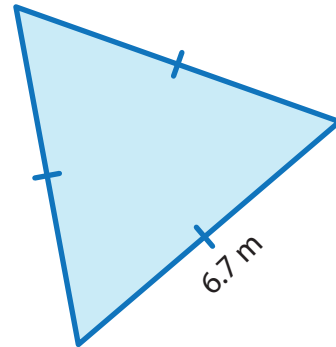
Perimeter = \_\_\_\_\_

3)



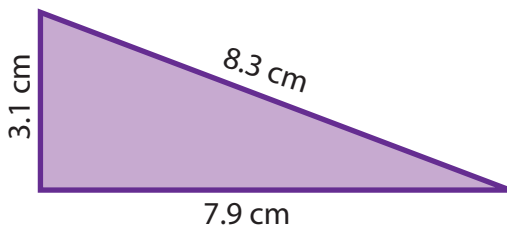
Perimeter = \_\_\_\_\_

4)



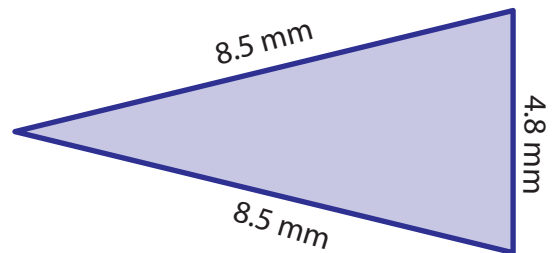
Perimeter = \_\_\_\_\_

5)



Perimeter = \_\_\_\_\_

6)



Perimeter = \_\_\_\_\_

The length of the sides of triangles are given. Find the perimeter.

1) 3.6 m, 7.2 m, 7.2 m

\_\_\_\_\_

2) 5.6 mm, 3.7mm, 4.2 mm

\_\_\_\_\_



# PERIMETER OF TRIANGLES

Name \_\_\_\_\_

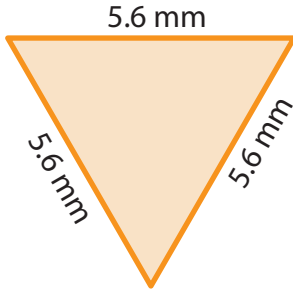
Score \_\_\_\_\_

## Answer key

PT:12

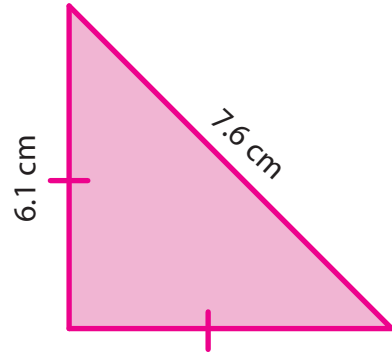
Find the perimeter of each triangle.

1)



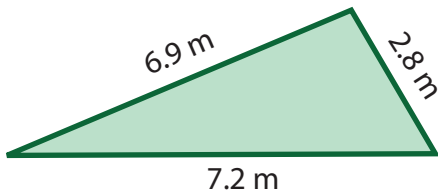
Perimeter = 16.8 mm

2)



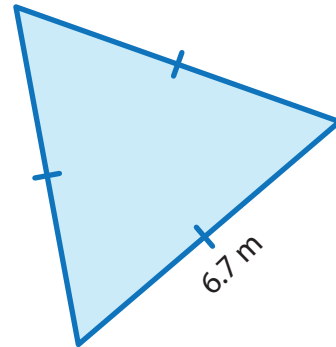
Perimeter = 19.8 cm

3)



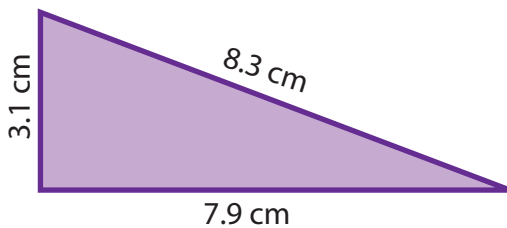
Perimeter = 16.9 m

4)



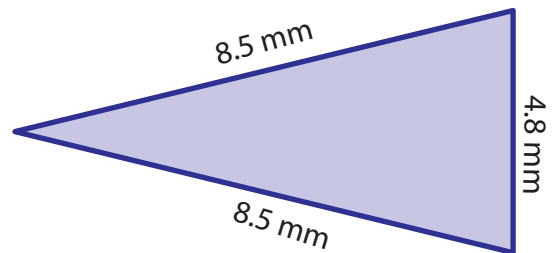
Perimeter = 20.1 m

5)



Perimeter = 19.3 cm

6)



Perimeter = 21.8 mm

The length of the sides of triangles are given. Find the perimeter.

1) 3.6 m, 7.2 m, 7.2 m

18 m

2) 5.6 mm, 3.7mm, 4.2 mm

13.5 mm