



PERIMETER OF TRIANGLES

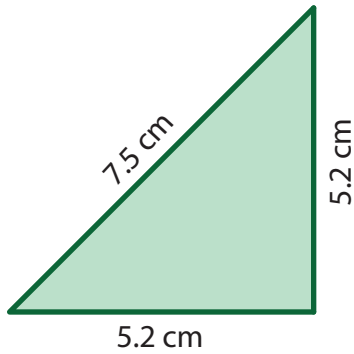
Name _____

Score _____

PT:11

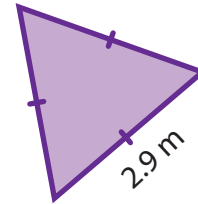
Find the perimeter of each triangle.

1)



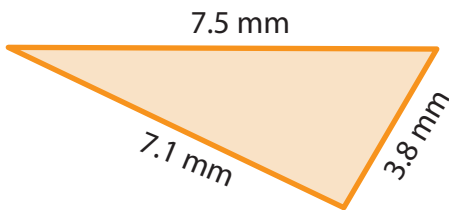
Perimeter = _____

2)



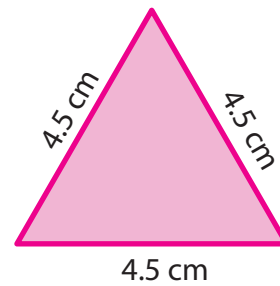
Perimeter = _____

3)



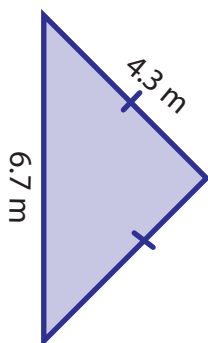
Perimeter = _____

4)



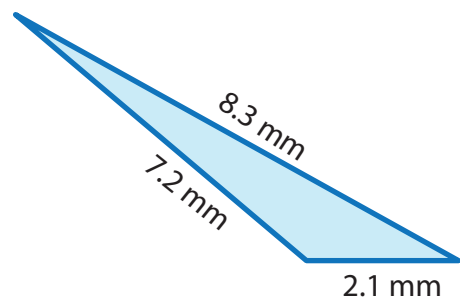
Perimeter = _____

5)



Perimeter = _____

6)



Perimeter = _____

The length of the sides of triangles are given. Find the perimeter.

1) 4.8 cm, 2.5 cm, 1.9 cm

2) 7.1 m, 7.1 m, 7.1 m



PERIMETER OF TRIANGLES

Name _____

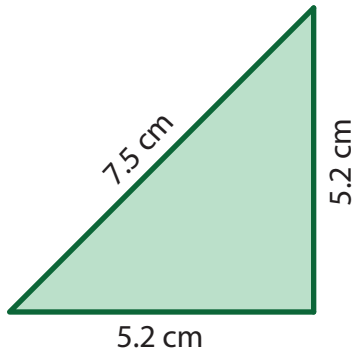
Score _____

Answer key

PT:11

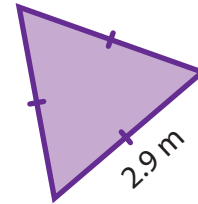
Find the perimeter of each triangle.

1)



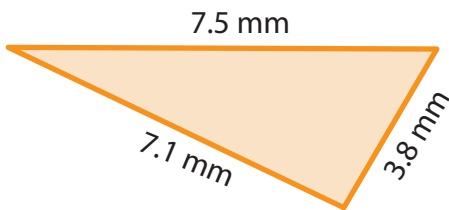
Perimeter = 17.9 cm

2)



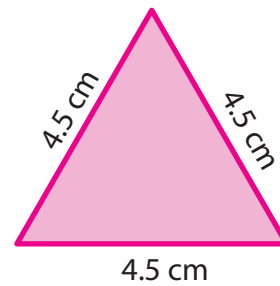
Perimeter = 8.7 m

3)



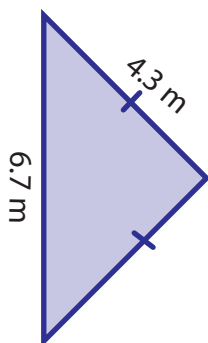
Perimeter = 18.4 mm

4)



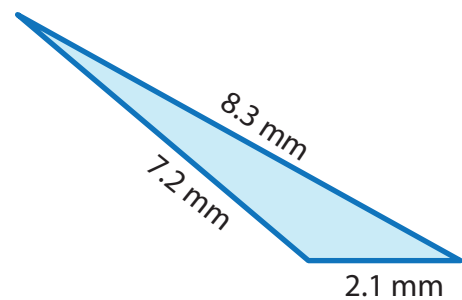
Perimeter = 13.5 cm

5)



Perimeter = 15.3 m

6)



Perimeter = 17.6 mm

The length of the sides of triangles are given. Find the perimeter.

1) 4.8 cm, 2.5 cm, 1.9 cm

9.2 cm

2) 7.1 m, 7.1 m, 7.1 m

21.3 m