



# PERIMETER OF TRIANGLES

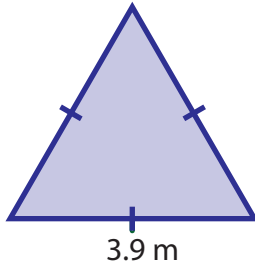
Name \_\_\_\_\_

Score \_\_\_\_\_

PT:10

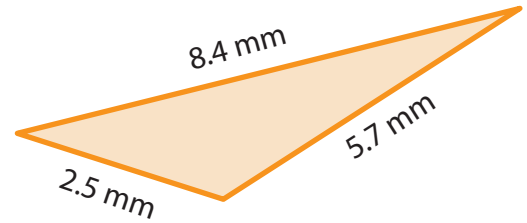
Find the perimeter of each triangle.

1)



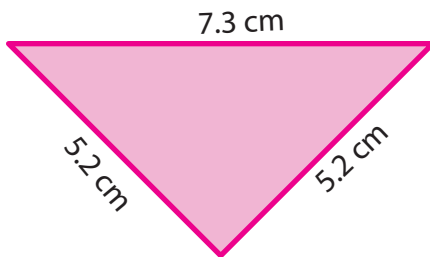
Perimeter = \_\_\_\_\_

2)



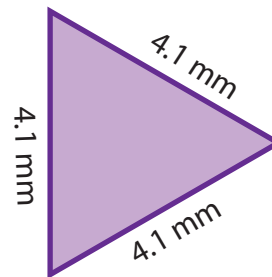
Perimeter = \_\_\_\_\_

3)



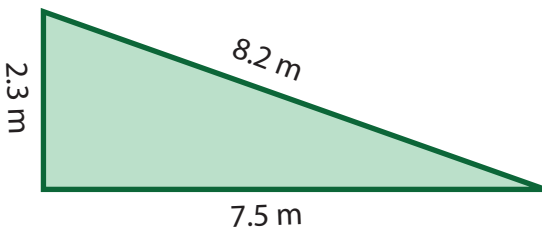
Perimeter = \_\_\_\_\_

4)



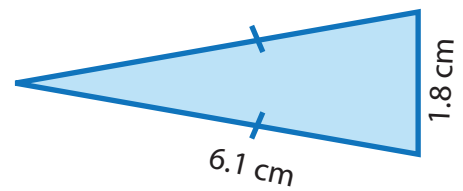
Perimeter = \_\_\_\_\_

5)



Perimeter = \_\_\_\_\_

6)



Perimeter = \_\_\_\_\_

The length of the sides of triangles are given. Find the perimeter.

1) 3.3 mm, 4.5 mm, 3.3 mm

\_\_\_\_\_

2) 6.8 cm, 6.8 cm, 6.8 cm

\_\_\_\_\_



# PERIMETER OF TRIANGLES

Name \_\_\_\_\_

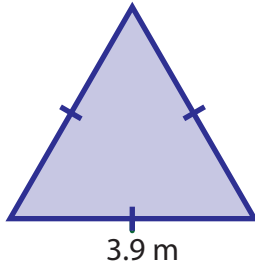
Score \_\_\_\_\_

## Answer key

PT:10

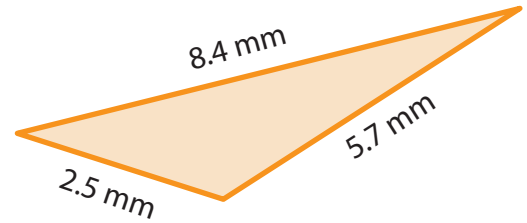
Find the perimeter of each triangle.

1)



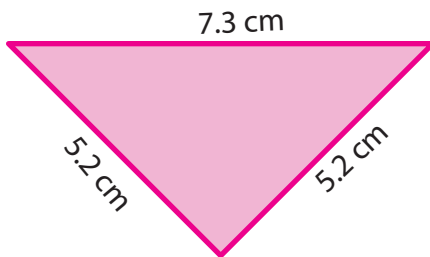
Perimeter = 11.7 m

2)



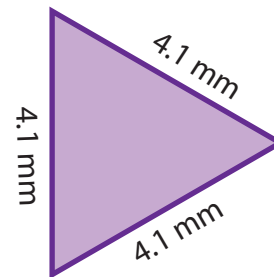
Perimeter = 16.6 mm

3)



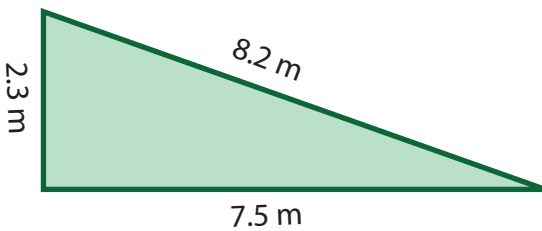
Perimeter = 17.7 cm

4)



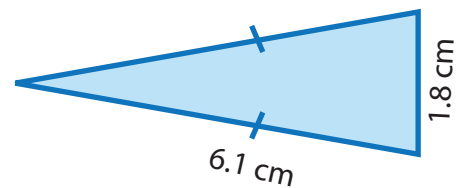
Perimeter = 12.3 mm

5)



Perimeter = 18 m

6)



Perimeter = 14 cm

The length of the sides of triangles are given. Find the perimeter.

1) 3.3 mm, 4.5 mm, 3.3 mm

11.1 mm

2) 6.8 cm, 6.8 cm, 6.8 cm

20.4 cm