



PERIMETER OF TRIANGLES

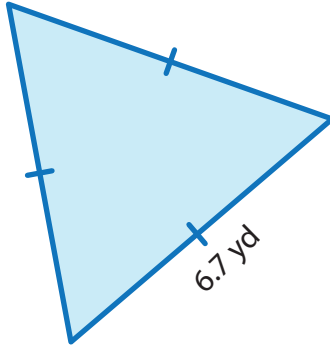
Name _____

Score _____

PT:09

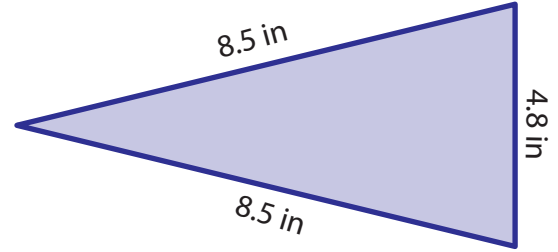
Find the perimeter of each triangle.

1)



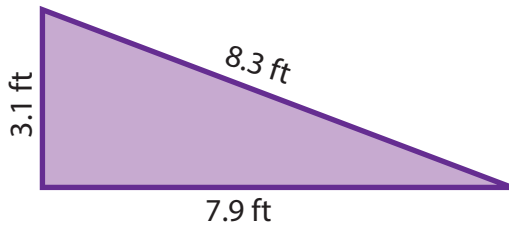
Perimeter = _____

2)



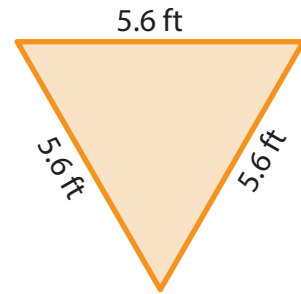
Perimeter = _____

3)



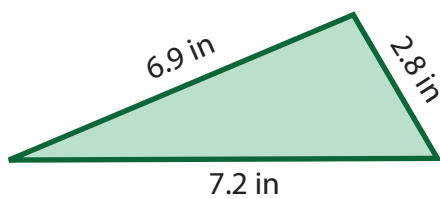
Perimeter = _____

4)



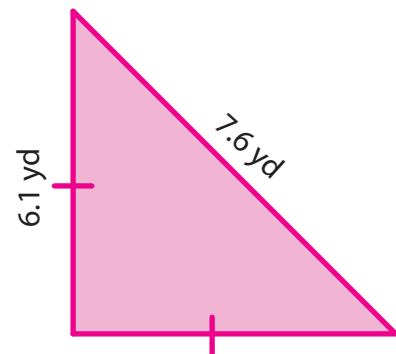
Perimeter = _____

5)



Perimeter = _____

6)



Perimeter = _____

The length of the sides of triangles are given. Find the perimeter.

1) 5.5 ft, 2.5 ft, 5.5 ft

2) 7.4 yd, 8.1 yd, 9.2 yd



PERIMETER OF TRIANGLES

Name _____

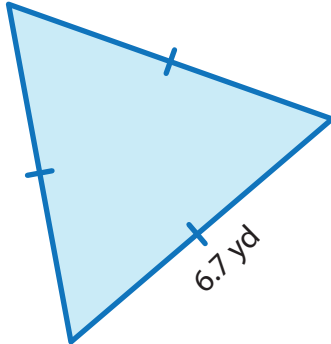
Score _____

Answer key

PT:09

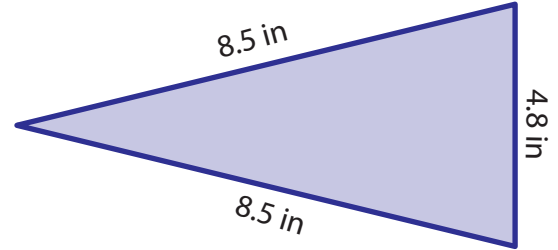
Find the perimeter of each triangle.

1)



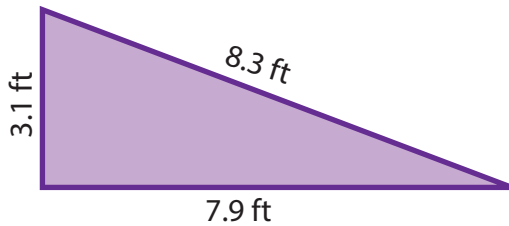
Perimeter = 20.1 yd

2)



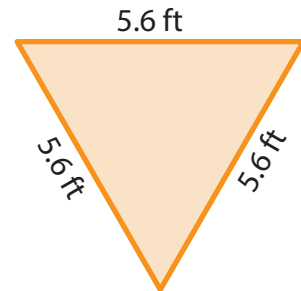
Perimeter = 21.8 in

3)



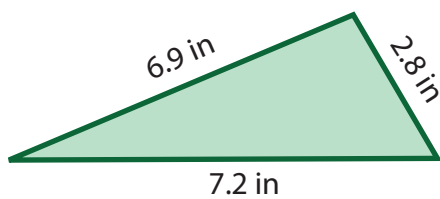
Perimeter = 19.3 ft

4)



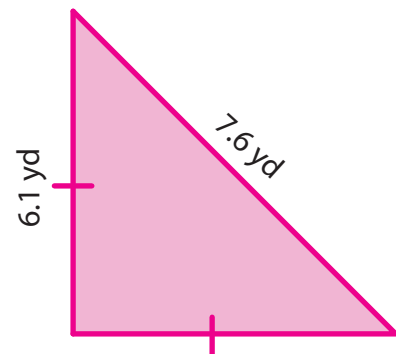
Perimeter = 16.8 ft

5)



Perimeter = 16.9 in

6)



Perimeter = 19.8 yd

The length of the sides of triangles are given. Find the perimeter.

1) 5.5 ft, 2.5 ft, 5.5 ft

13.5 ft

2) 7.4 yd, 8.1 yd, 9.2 yd

24.7 yd