



# PERIMETER OF TRIANGLES

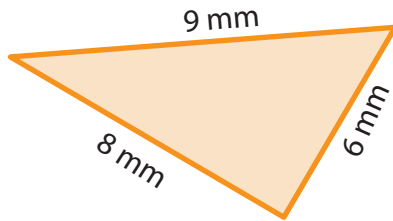
Name \_\_\_\_\_

Score \_\_\_\_\_

PT:06

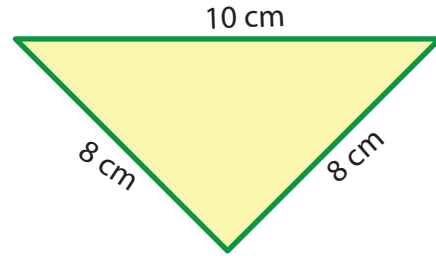
Find the perimeter of each triangle.

1)



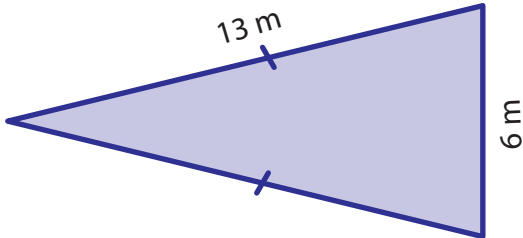
Perimeter =

2)



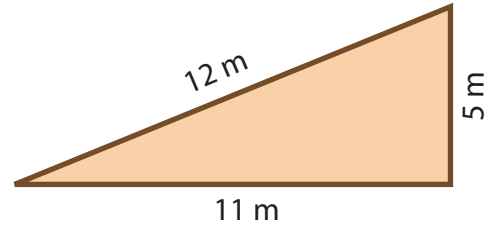
Perimeter =

3)



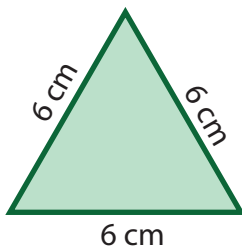
Perimeter =

4)



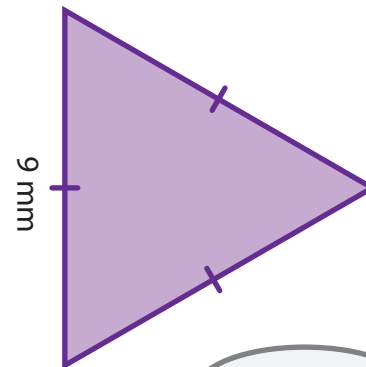
Perimeter =

5)



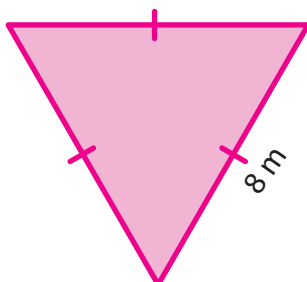
Perimeter =

6)



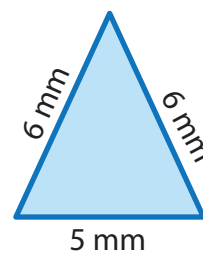
Perimeter =

7)



Perimeter =

8)



Perimeter =



# PERIMETER OF TRIANGLES

Name \_\_\_\_\_

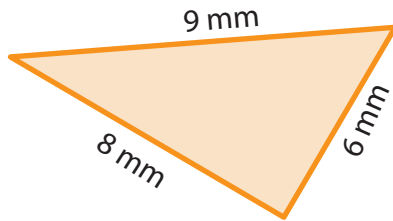
Score \_\_\_\_\_

## Answer key

PT:06

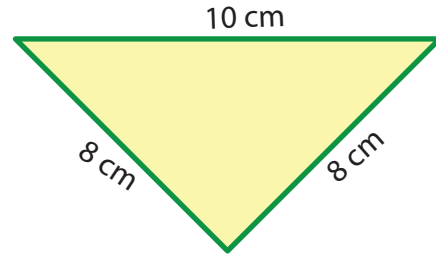
Find the perimeter of each triangle.

1)



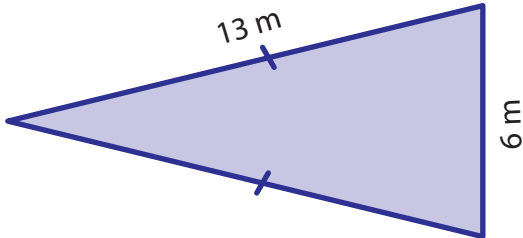
Perimeter = **23 mm**

2)



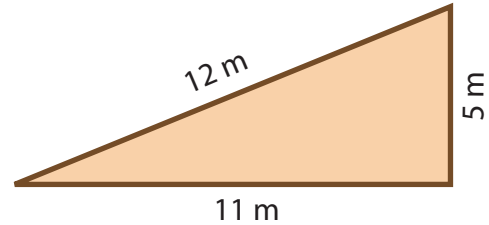
Perimeter = **26 cm**

3)



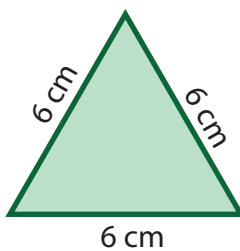
Perimeter = **32 m**

4)



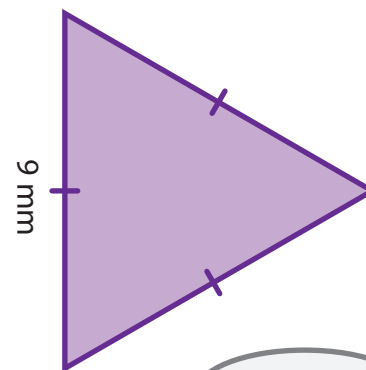
Perimeter = **28 m**

5)



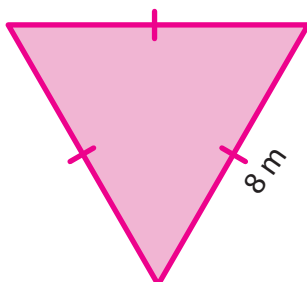
Perimeter = **18 cm**

6)



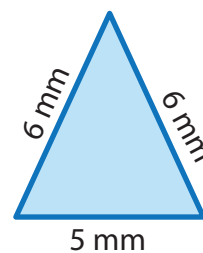
Perimeter = **27 mm**

7)



Perimeter = **24 m**

8)



Perimeter = **17 mm**