



PERIMETER OF TRIANGLES

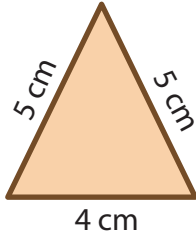
Name _____

Score _____

PT:05

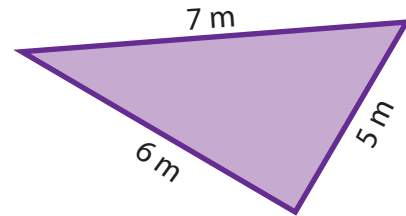
Find the perimeter of each triangle.

1)



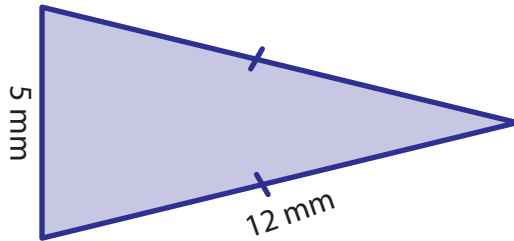
Perimeter =

2)



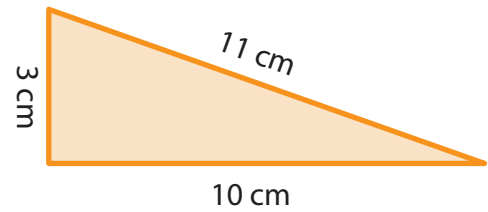
Perimeter =

3)



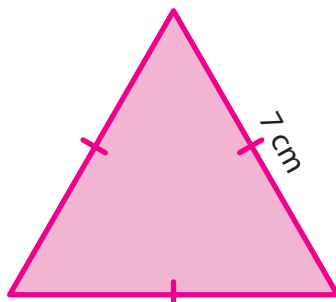
Perimeter =

4)



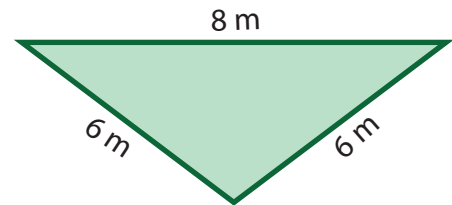
Perimeter =

5)



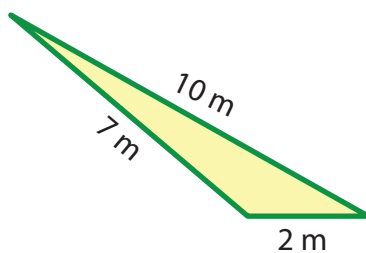
Perimeter =

6)



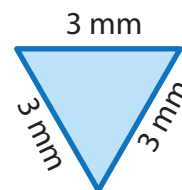
Perimeter =

7)



Perimeter =

8)



Perimeter =



PERIMETER OF TRIANGLES

Name _____

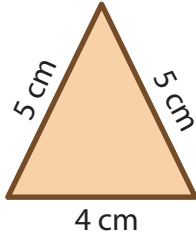
Score _____

Answer key

PT:05

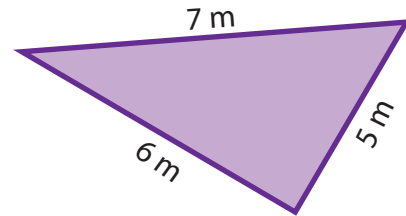
Find the perimeter of each triangle.

1)



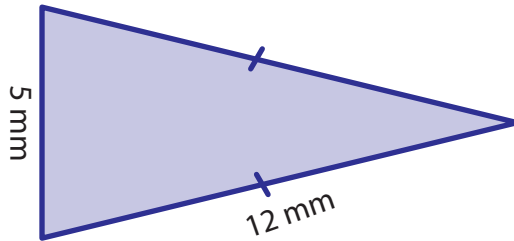
Perimeter = **14 cm**

2)



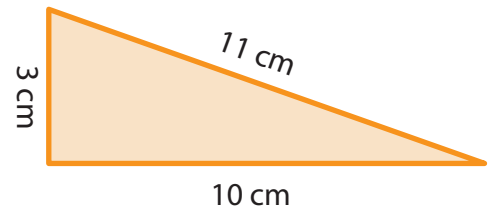
Perimeter = **18 m**

3)



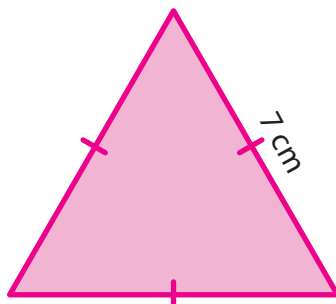
Perimeter = **29 mm**

4)



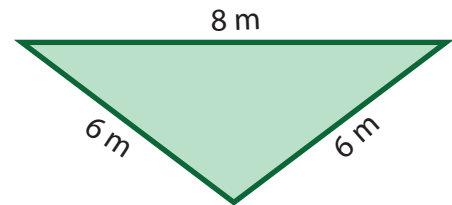
Perimeter = **24 cm**

5)



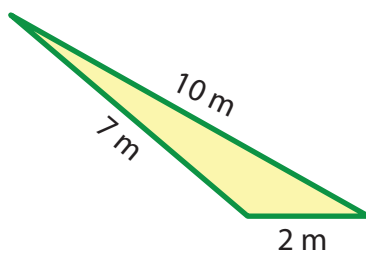
Perimeter = **21 cm**

6)



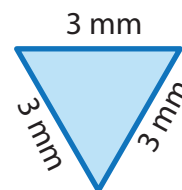
Perimeter = **20 m**

7)



Perimeter = **19 m**

8)



Perimeter = **9 mm**