



PERIMETER OF TRIANGLES

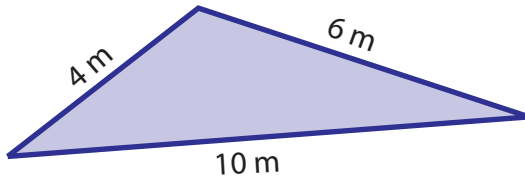
Name _____

Score _____

PT:04

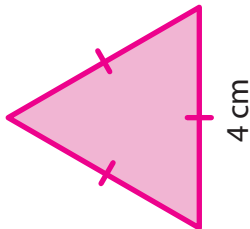
Find the perimeter of each triangle.

1)



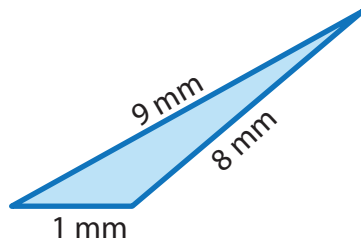
Perimeter =

3)



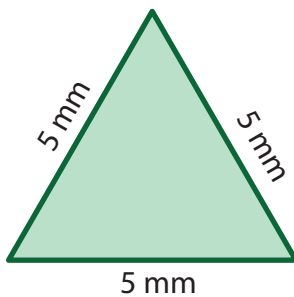
Perimeter =

5)



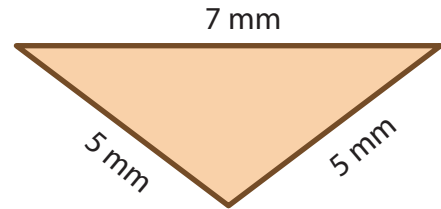
Perimeter =

7)



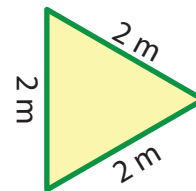
Perimeter =

2)



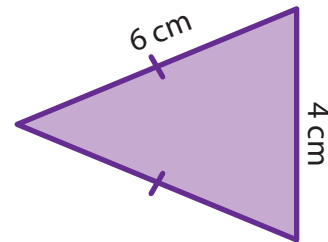
Perimeter =

4)



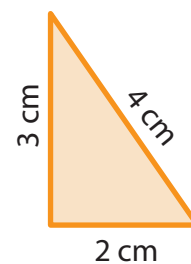
Perimeter =

6)



Perimeter =

8)



Perimeter =



PERIMETER OF TRIANGLES

Name _____

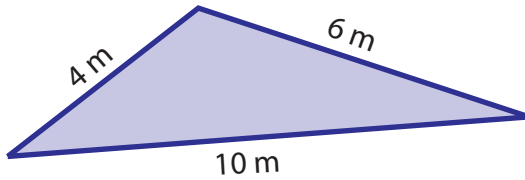
Score _____

Answer key

PT:04

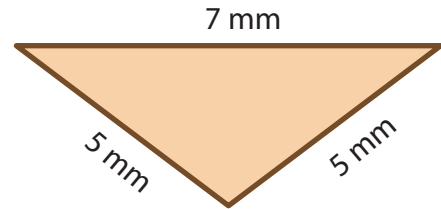
Find the perimeter of each triangle.

1)



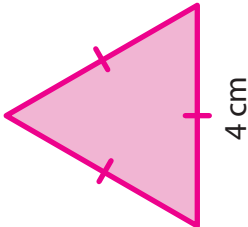
Perimeter = **20 m**

2)



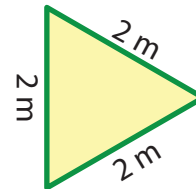
Perimeter = **17 mm**

3)



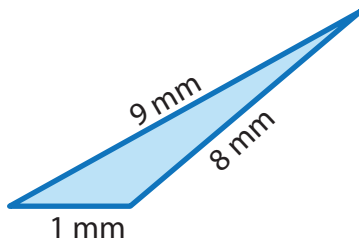
Perimeter = **12 cm**

4)



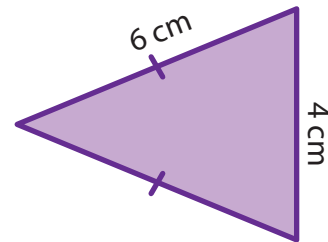
Perimeter = **6 m**

5)



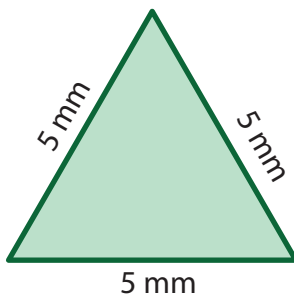
Perimeter = **18 mm**

6)



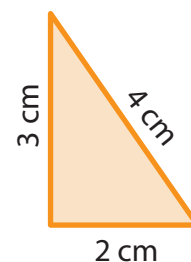
Perimeter = **16 cm**

7)



Perimeter = **15 mm**

8)



Perimeter = **9 cm**