



PERIMETER OF TRIANGLES

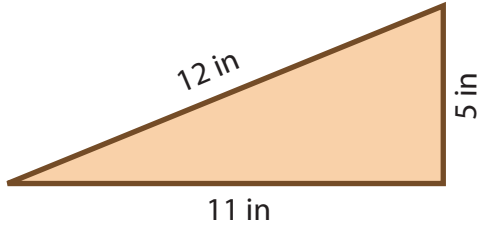
Name _____

Score _____

PT:03

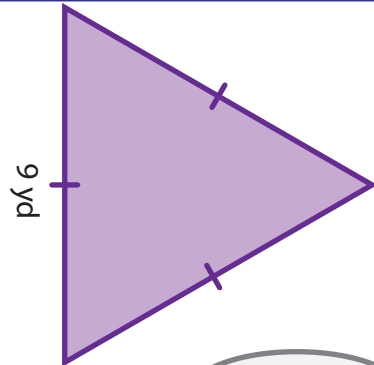
Find the perimeter of each triangle.

1)



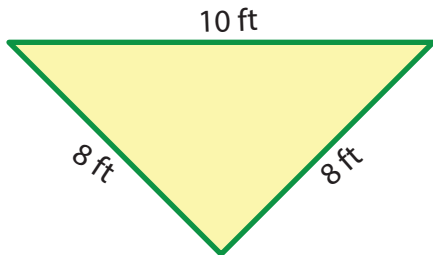
Perimeter =

2)



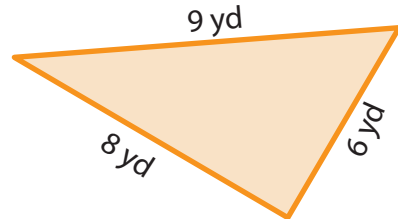
Perimeter =

3)



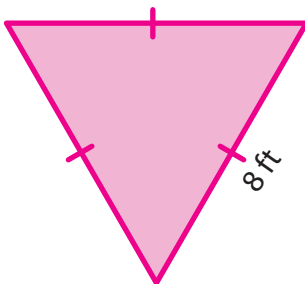
Perimeter =

4)



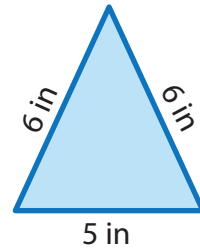
Perimeter =

5)



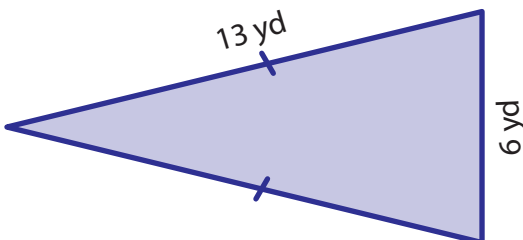
Perimeter =

6)



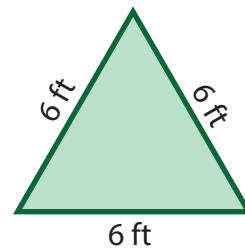
Perimeter =

7)



Perimeter =

8)



Perimeter =



PERIMETER OF TRIANGLES

Name _____

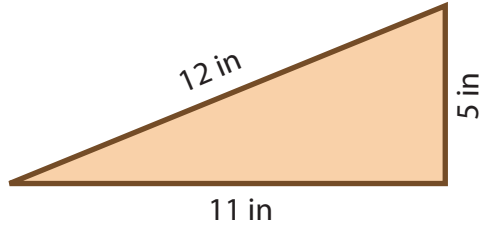
Score _____

Answer key

PT:03

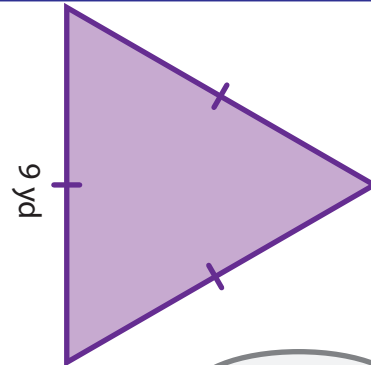
Find the perimeter of each triangle.

1)



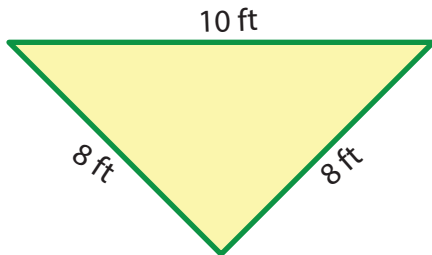
Perimeter = **28 in**

2)



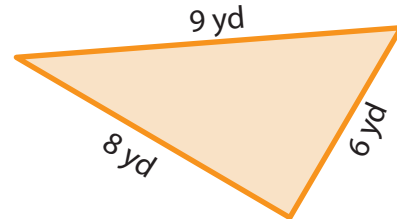
Perimeter = **27 yd**

3)



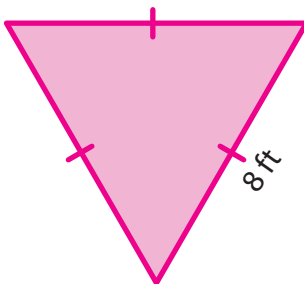
Perimeter = **26 ft**

4)



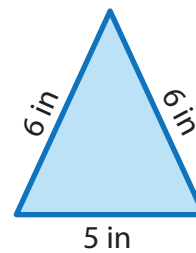
Perimeter = **23 yd**

5)



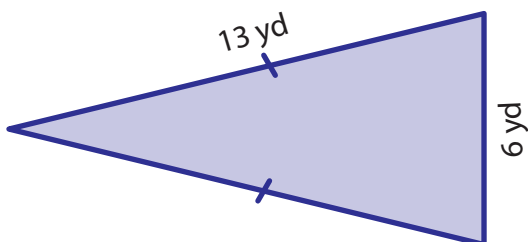
Perimeter = **24 ft**

6)



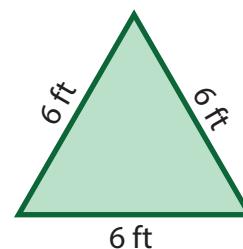
Perimeter = **17 in**

7)



Perimeter = **32 yd**

8)



Perimeter = **18 ft**