



# Pythagorean Theorem

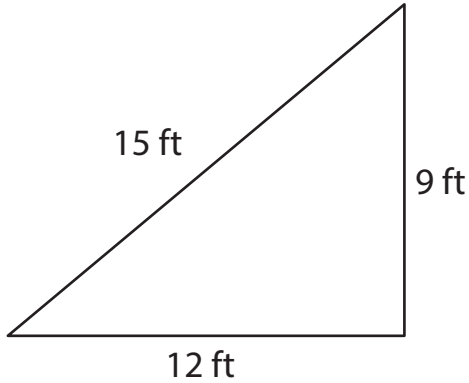
Name \_\_\_\_\_

Score \_\_\_\_\_

PT:02

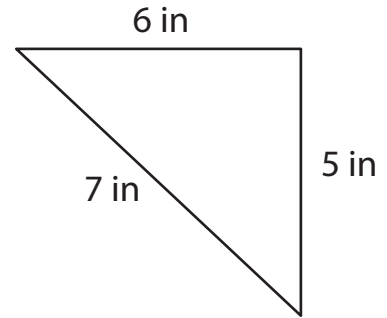
Write whether the following lengths form a right triangle by applying the Pythagorean theorem.

1)



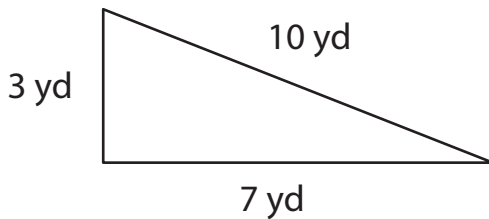
\_\_\_\_\_

2)



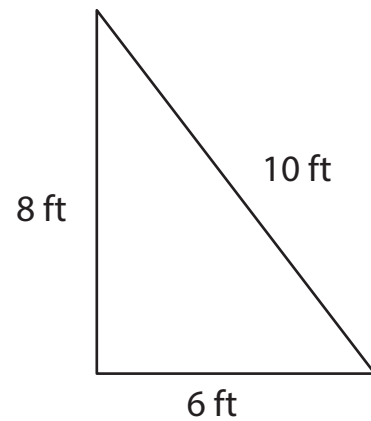
\_\_\_\_\_

3)



\_\_\_\_\_

4)



\_\_\_\_\_

Write whether the given side lengths  $a$ ,  $b$ , and  $c$  form a right triangle by using the Pythagorean theorem.

5)  $a = 13$  yd,  $b = 84$  yd,  $c = 85$  yd

\_\_\_\_\_

6)  $a = 7$  ft,  $b = 24$  ft,  $c = 25$  ft

\_\_\_\_\_

7)  $a = 6$  in,  $b = 5$  in,  $c = 9$  in

\_\_\_\_\_

8)  $a = 17$  yd,  $b = 8$  yd,  $c = 12$  yd

\_\_\_\_\_



# Pythagorean Theorem

Name \_\_\_\_\_

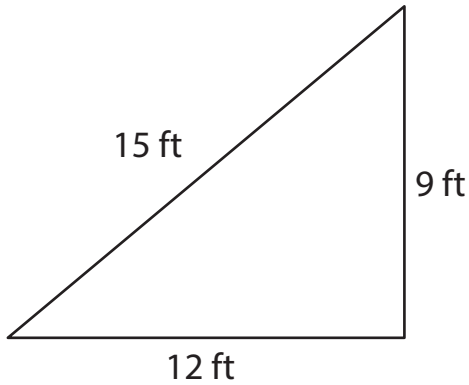
Score \_\_\_\_\_

## Answer key

PT:02

Write whether the following lengths form a right triangle by applying the Pythagorean theorem.

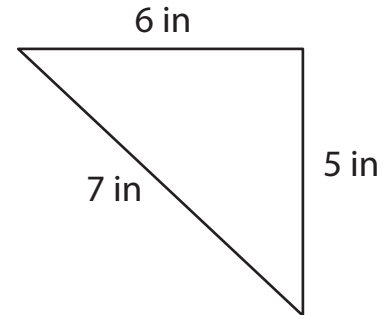
1)



**Right triangle**

---

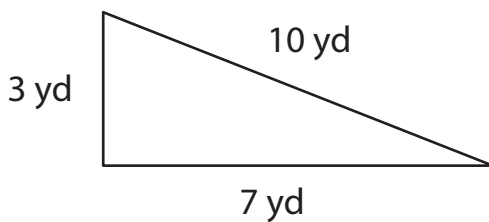
2)



**Not a right triangle**

---

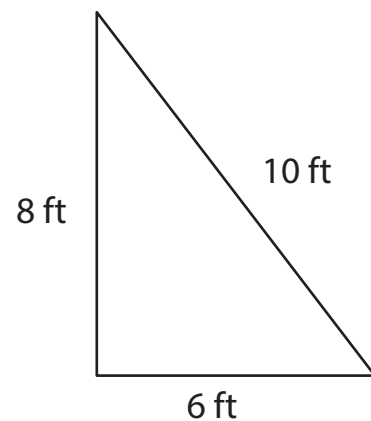
3)



**Not a right triangle**

---

4)



**Right triangle**

---

Write whether the given side lengths a, b, and c form a right triangle by using the Pythagorean theorem.

5)  $a = 13$  yd,  $b = 84$  yd,  $c = 85$  yd

**Right triangle**

---

6)  $a = 7$  ft,  $b = 24$  ft,  $c = 25$  ft

**Right triangle**

---

7)  $a = 6$  in,  $b = 5$  in,  $c = 9$  in

**Not a right triangle**

---

8)  $a = 17$  yd,  $b = 8$  yd,  $c = 12$  yd

**Not a right triangle**

---