



PERIMETER OF TRIANGLES

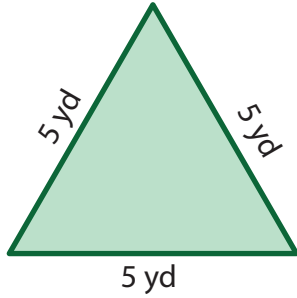
Name _____

Score _____

PT:01

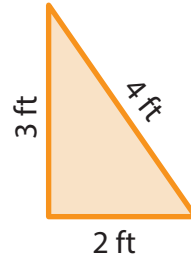
Find the perimeter of each triangle.

1)



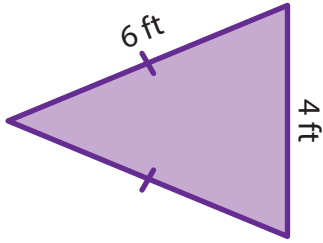
Perimeter =

2)



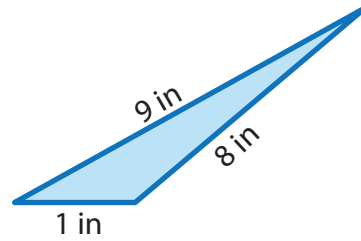
Perimeter =

3)



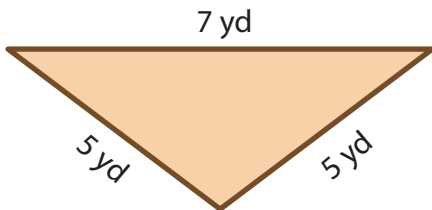
Perimeter =

4)



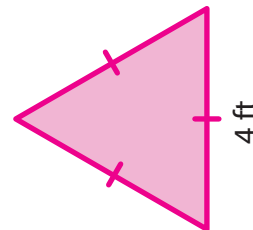
Perimeter =

5)



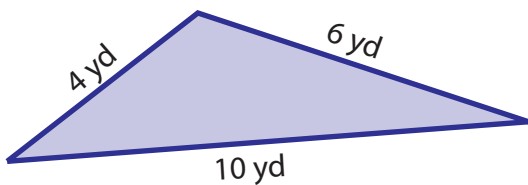
Perimeter =

6)



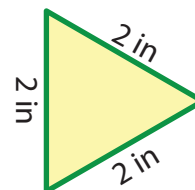
Perimeter =

7)



Perimeter =

8)



Perimeter =



PERIMETER OF TRIANGLES

Name _____

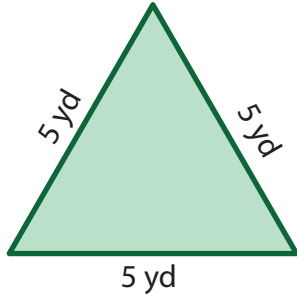
Score _____

Answer key

PT:01

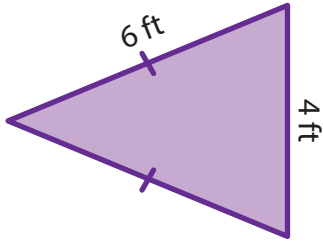
Find the perimeter of each triangle.

1)



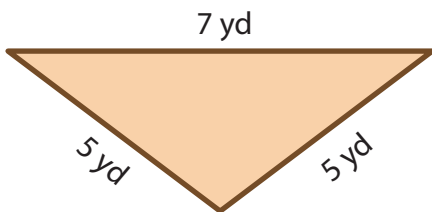
Perimeter = **15 yd**

3)



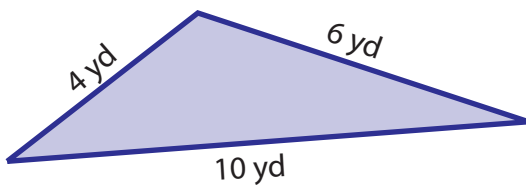
Perimeter = **16 ft**

5)



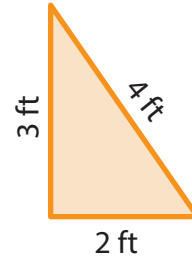
Perimeter = **17 yd**

7)



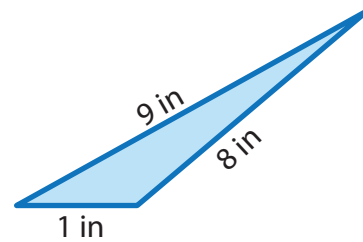
Perimeter = **20 yd**

2)



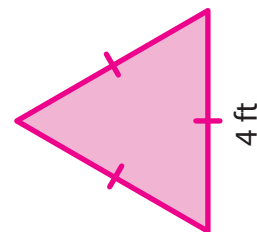
Perimeter = **9 ft**

4)



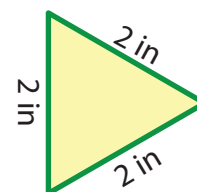
Perimeter = **18 in**

6)



Perimeter = **12 ft**

8)



Perimeter = **6 in**