



# PATTERN - SHAPES

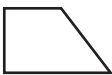

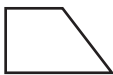

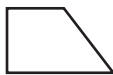

Name \_\_\_\_\_

Score \_\_\_\_\_

PS:27







Draw the missing shapes to complete the pattern.







1)   \_\_\_\_\_    

2)       \_\_\_\_\_

3) \_\_\_\_\_      \_\_\_\_\_ 

4)     \_\_\_\_\_  

5) \_\_\_\_\_  \_\_\_\_\_     

6)       \_\_\_\_\_



# PATTERN - SHAPES

Name \_\_\_\_\_

Score \_\_\_\_\_

Answer key

PS:27

Draw the missing shapes to complete the pattern.

