



Perimeter of Rectangles

Name _____

Score _____

PR:17

Find the perimeter of each rectangle.

1) Breadth = 9000 mm

Length = 5 m

Perimeter = _____ m

2) Breadth = 4 cm

Length = 0.11 m

Perimeter = _____ cm

3) Breadth = 10 cm

Length = 180 mm

Perimeter = _____ cm

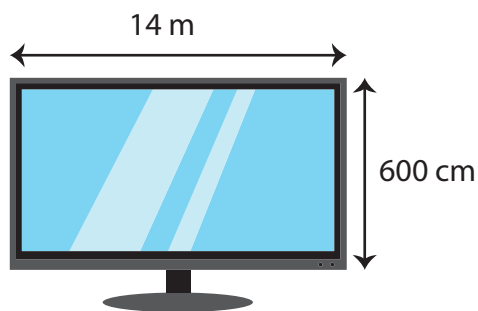
4) Breadth = 3 mm

Length = 0.4 cm

Perimeter = _____ mm

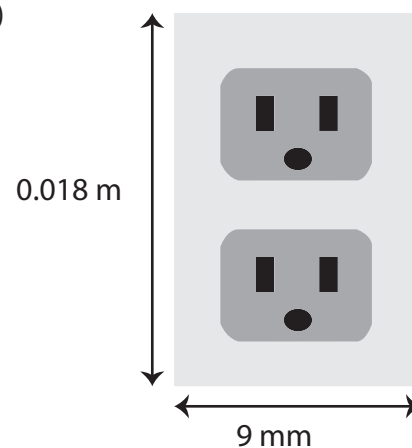
Find the perimeter of each rectangle.

1)



Perimeter = _____ m

2)



Perimeter = _____ mm

The breadth and length of a rectangle are 24 m and 3000 cm respectively. Find the perimeter of a rectangle in meters.

_____ m



Perimeter of Rectangles

Name _____

Score _____

Answer key

PR:17

Find the perimeter of each rectangle.

1) Breadth = 9000 mm

Length = 5 m

Perimeter = 28 m

2) Breadth = 4 cm

Length = 0.11 m

Perimeter = 30 cm

3) Breadth = 10 cm

Length = 180 mm

Perimeter = 56 cm

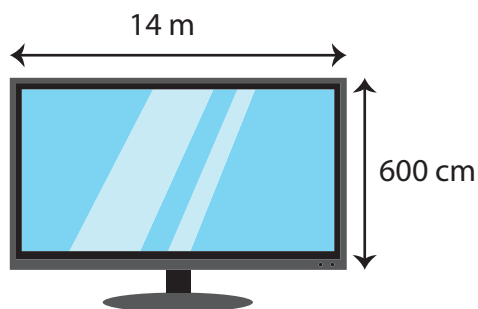
4) Breadth = 3 mm

Length = 0.4 cm

Perimeter = 14 mm

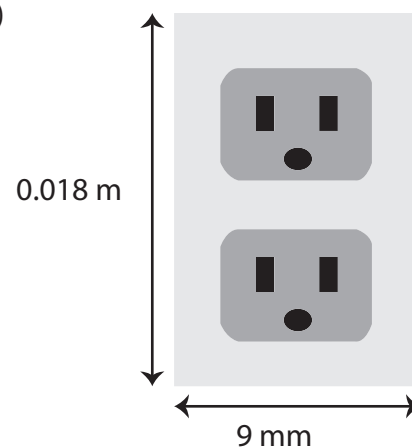
Find the perimeter of each rectangle.

1)



Perimeter = 40 m

2)



Perimeter = 54 mm

The breadth and length of a rectangle are 24 m and 3000 cm respectively. Find the perimeter of a rectangle in meters.

108 m