



Perimeter of Rectangles

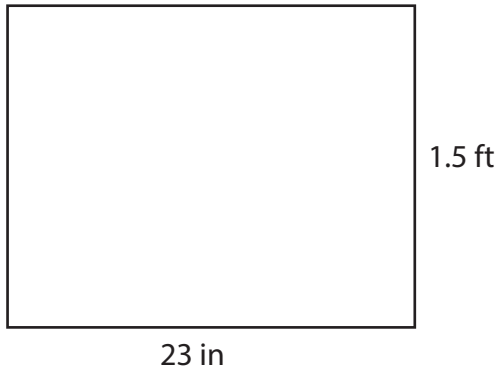
Name _____

Score _____

PR:14

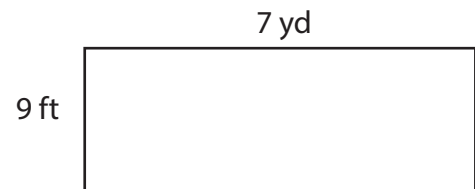
Find the perimeter of each rectangle.

1)



Perimeter = _____ in

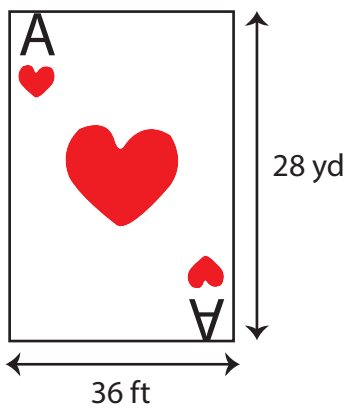
2)



Perimeter = _____ ft

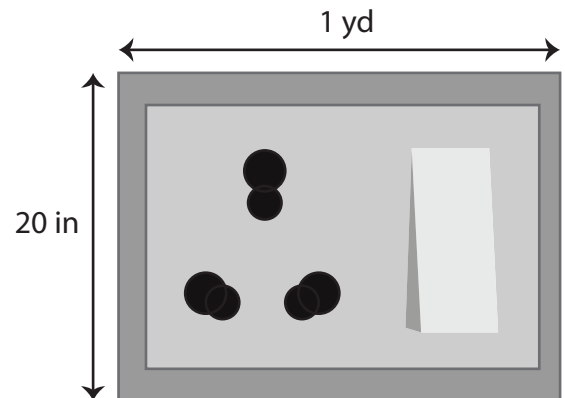
Find the perimeter of each rectangle.

1)



Perimeter = _____ yd

2)



Perimeter = _____ in

Find the perimeter of each rectangle.

1) Breadth = 6 yd

Length = 11 ft

Perimeter = _____ ft

2) Breadth = 5 yd

Length = 72 in

Perimeter = _____ yd



Perimeter of Rectangles

Name _____

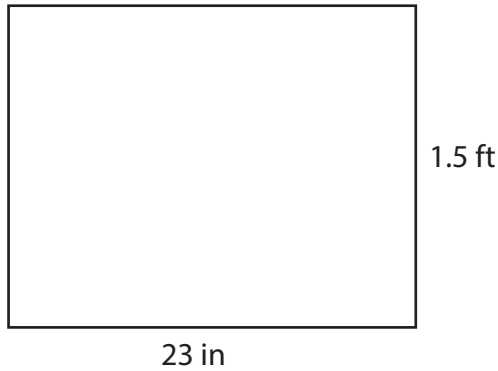
Score _____

Answer key

PR:14

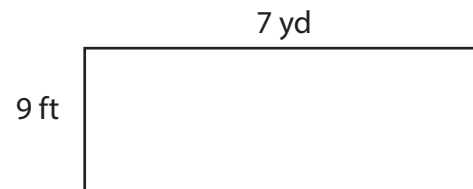
Find the perimeter of each rectangle.

1)



Perimeter = 82 in

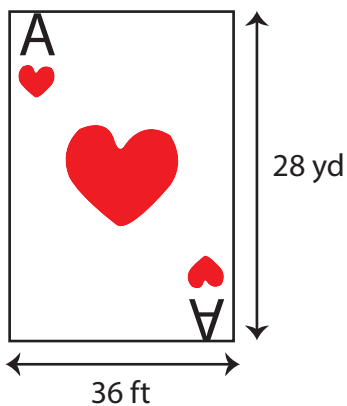
2)



Perimeter = 60 ft

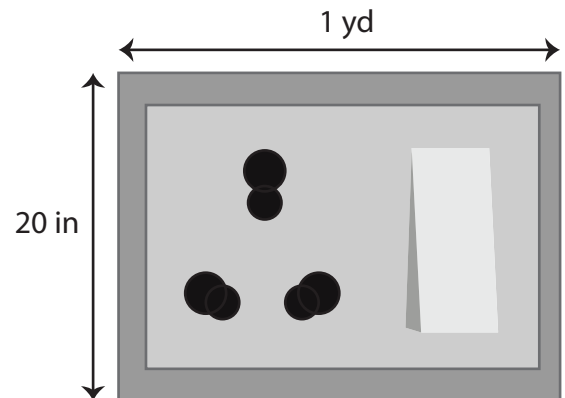
Find the perimeter of each rectangle.

1)



Perimeter = 80 yd

2)



Perimeter = 112 in

Find the perimeter of each rectangle.

1) Breadth = 6 yd

Length = 11 ft

Perimeter = 58 ft

2) Breadth = 5 yd

Length = 72 in

Perimeter = 14 yd