



Perimeter of Rectangles

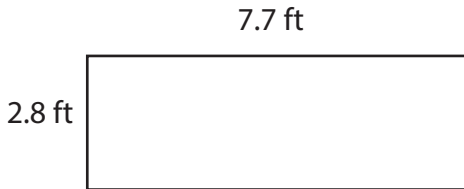
Name _____

Score _____

PR:09

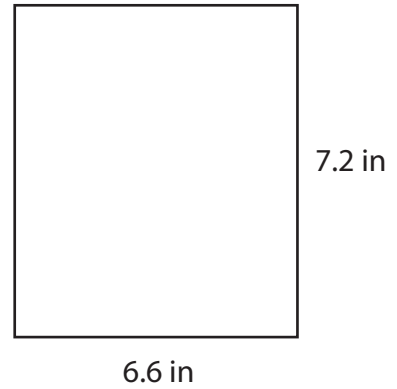
Find the perimeter of each rectangle.

1)



Perimeter = ft

2)



Perimeter = in

Find the perimeter of each rectangle.

1) Breadth = 5.8 yd ; Length = 1.7 yd

Perimeter = yd

2) Breadth = 10.4 ft ; Length = 12.1 ft

Perimeter = ft

3) Breadth = 3.6 in ; Length = 2.2 in

Perimeter = in

4) Breadth = 6.9 yd ; Length = 8.3 yd

Perimeter = yd

5) Breadth = 7.4 ft ; Length = 13.4 ft

Perimeter = ft

6) Breadth = 9.2 in ; Length = 4.4 in

Perimeter = in



Perimeter of Rectangles

Name _____

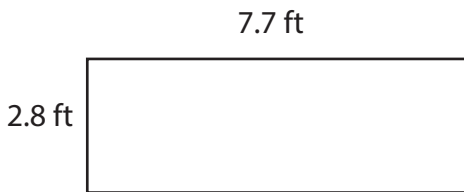
Score _____

Answer key

PR:09

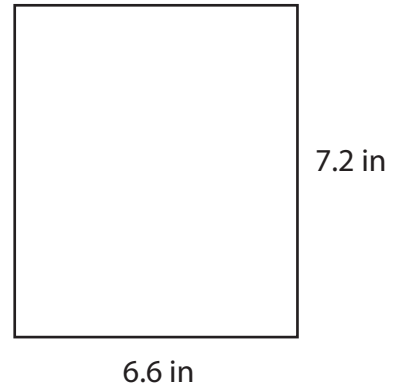
Find the perimeter of each rectangle.

1)



Perimeter = **21** ft

2)



Perimeter = **27.6** in

Find the perimeter of each rectangle.

1) Breadth = 5.8 yd ; Length = 1.7 yd

Perimeter = **15** yd

2) Breadth = 10.4 ft ; Length = 12.1 ft

Perimeter = **45** ft

3) Breadth = 3.6 in ; Length = 2.2 in

Perimeter = **11.6** in

4) Breadth = 6.9 yd ; Length = 8.3 yd

Perimeter = **30.4** yd

5) Breadth = 7.4 ft ; Length = 13.4 ft

Perimeter = **41.6** ft

6) Breadth = 9.2 in ; Length = 4.4 in

Perimeter = **27.2** in