



Perimeter of Rectangles

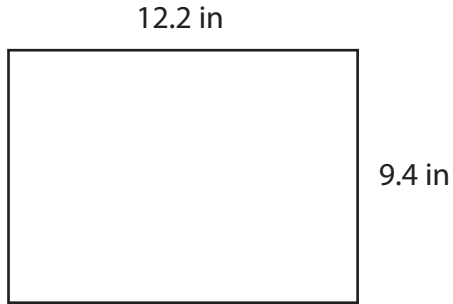
Name _____

Score _____

PR:07

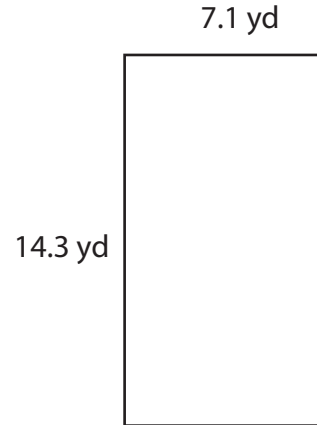
Find the perimeter of each rectangle.

1)



Perimeter = in

2)



Perimeter = yd

Find the perimeter of each rectangle.

1) Breadth = 1.6 ft ; Length = 4.5 ft

Perimeter = ft

2) Breadth = 8.7 in ; Length = 10.1 in

Perimeter = in

3) Breadth = 6.2 yd ; Length = 2.9 yd

Perimeter = yd

4) Breadth = 3.5 ft ; Length = 9.5 ft

Perimeter = ft

5) Breadth = 11.6 in ; Length = 15.4 in

Perimeter = in

6) Breadth = 2.2 yd ; Length = 1.8 yd

Perimeter = yd



Perimeter of Rectangles

Name _____

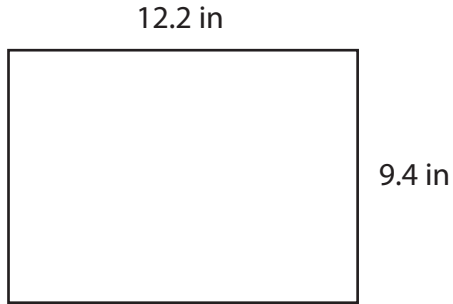
Score _____

Answer key

PR:07

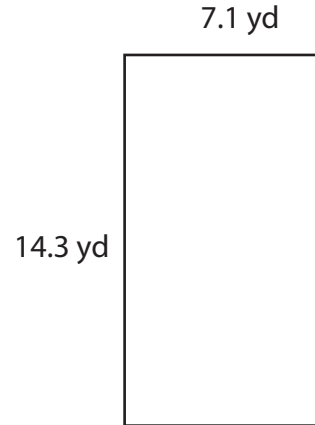
Find the perimeter of each rectangle.

1)



Perimeter = **43.2** in

2)



Perimeter = **42.8** yd

Find the perimeter of each rectangle.

1) Breadth = 1.6 ft ; Length = 4.5 ft

Perimeter = **12.2** ft

2) Breadth = 8.7 in ; Length = 10.1 in

Perimeter = **37.6** in

3) Breadth = 6.2 yd ; Length = 2.9 yd

Perimeter = **18.2** yd

4) Breadth = 3.5 ft ; Length = 9.5 ft

Perimeter = **26** ft

5) Breadth = 11.6 in ; Length = 15.4 in

Perimeter = **54** in

6) Breadth = 2.2 yd ; Length = 1.8 yd

Perimeter = **8** yd