



Perimeter of Squares


Name _____

Score _____


PS:17

Find the perimeter of each square.


1)




10.1 mm

Perimeter = 


2)




14.5 cm

Perimeter = 

3)



17.7 m

Perimeter = 

Find the perimeter of each square whose dimensions are

1) 5.6 cm

2) 11.8 m

3) 21.5 mm



Find the perimeter of each square from side length. Complete the table.

Q. No	Side Length	Perimeter
1)	13.5 m	
2)	28.1 cm	
3)	6.9 mm	
4)	30.3 m	

Q. No	Side Length	Perimeter
1)	9.7 cm	
2)	19.5 mm	
3)	1.2 m	
4)	23.4 mm	



Perimeter of Squares

Name _____


Score _____

Answer key

PS:17

Find the perimeter of each square.


1)



10.1 mm

Perimeter = **40.4 mm**


2)



14.5 cm

Perimeter = **58 cm**

3)



17.7 m

Perimeter = **70.8 m**

Find the perimeter of each square whose dimensions are

1) 5.6 cm

22.4 cm

2) 11.8 m

47.2 m

3) 21.5 mm

86 mm

Find the perimeter of each square from side length. Complete the table.

Q. No	Side Length	Perimeter
1)	13.5 m	54 m
2)	28.1 cm	112.4 cm
3)	6.9 mm	27.6 mm
4)	30.3 m	121.2 m

Q. No	Side Length	Perimeter
1)	9.7 cm	38.8 cm
2)	19.5 mm	78 mm
3)	1.2 m	4.8 m
4)	23.4 mm	93.6 mm