



Perimeter of Squares

Name _____


Score _____

PS:16

Find the perimeter of each square.


1)

9.5 cm



Perimeter =

2)



6.3 m

Perimeter =

3)



Perimeter =

Find the perimeter of each square whose dimensions are

1) 1.8 m

2) 20.5 mm

3) 12.1 cm



Find the perimeter of each square from side length. Complete the table.

Q. No	Side Length	Perimeter
1)	4.5 cm	
2)	15.6 mm	
3)	2.9 m	
4)	21.4 mm	

Q. No	Side Length	Perimeter
1)	33.3 m	
2)	7.8 cm	
3)	14.1 mm	
4)	6.4 m	



Perimeter of Squares

Name _____

Score _____


Answer key

PS:16

Find the perimeter of each square.

1)


9.5 cm



Perimeter = **38 cm**

2)

6.3 m



Perimeter = **25.2 m**

3)

2.6 mm



Perimeter = **10.4 mm**

Find the perimeter of each square whose dimensions are

1) 1.8 m

7.2 m

2) 20.5 mm

82 mm

3) 12.1 cm

48.4 cm

Find the perimeter of each square from side length. Complete the table.

Q. No	Side Length	Perimeter
1)	4.5 cm	18 cm
2)	15.6 mm	62.4 mm
3)	2.9 m	11.6 m
4)	21.4 mm	85.6 mm

Q. No	Side Length	Perimeter
1)	33.3 m	133.2 m
2)	7.8 cm	31.2 cm
3)	14.1 mm	56.4 mm
4)	6.4 m	25.6 m