



Perimeter of Squares

Name _____

Score _____

PS:15


Find the perimeter of each square.

1)



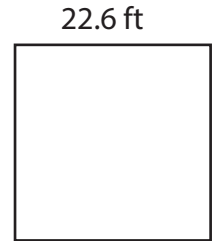
Perimeter =

2)




Perimeter =

3)




Perimeter =

4)



Perimeter =

5)



Perimeter =

6)



Perimeter =

Find the perimeter of each square whose dimensions are

1) 26.3 in

Perimeter =

2) 12.9 yd

Perimeter =

3) 9.8 ft

Perimeter =

4) 15.5 ft

Perimeter =

5) 30.5 in

Perimeter =

6) 1.6 yd

Perimeter =



Perimeter of Squares

Name _____

Score _____

Answer key

PS:15

Find the perimeter of each square.

1)



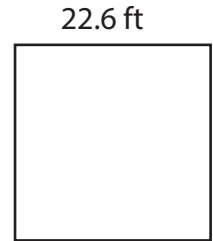
Perimeter = **80.4 in**

2)




Perimeter = **75.2 yd**

3)




Perimeter = **90.4 ft**

4)



Perimeter = **110 yd**

5)



Perimeter = **118.8 ft**

6)



Perimeter = **92.8 in**

Find the perimeter of each square whose dimensions are

1) 26.3 in

Perimeter = **105.2 in**

2) 12.9 yd

Perimeter = **51.6 yd**

3) 9.8 ft

Perimeter = **39.2 ft**

4) 15.5 ft

Perimeter = **62 ft**

5) 30.5 in

Perimeter = **122 in**

6) 1.6 yd

Perimeter = **6.4 yd**