



Perimeter of Squares

Name _____

Score _____

PS:13


Find the perimeter of each square.

1)



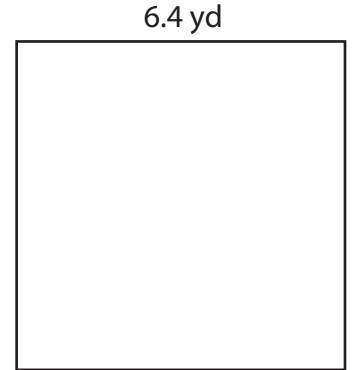
Perimeter =

2)



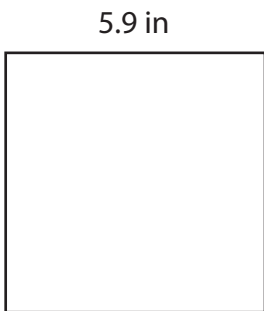
Perimeter =

3)



Perimeter =

4)



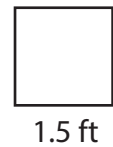
Perimeter =

5)



Perimeter =

6)



Perimeter =

Find the perimeter of each square whose dimensions are

1) 6.6 yd

Perimeter =

2) 1.9 ft

Perimeter =

3) 10.7 in

Perimeter =

4) 18.2 ft

Perimeter =

5) 8.5 in

Perimeter =

6) 3.8 yd

Perimeter =



Perimeter of Squares

Name _____

Score _____

Answer key

PS:13


Find the perimeter of each square.

1)



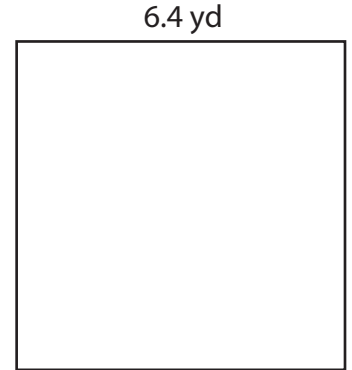
Perimeter = **18.8 ft**

2)



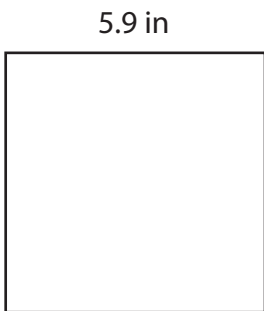
Perimeter = **8.4 in**

3)



Perimeter = **25.6 yd**

4)



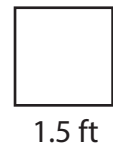
Perimeter = **23.6 in**

5)



Perimeter = **12.8 yd**

6)



Perimeter = **6 ft**

Find the perimeter of each square whose dimensions are

1) 6.6 yd

Perimeter = **26.4 yd**

2) 1.9 ft

Perimeter = **7.6 ft**

3) 10.7 in

Perimeter = **42.8 in**

4) 18.2 ft

Perimeter = **72.8 ft**

5) 8.5 in

Perimeter = **34 in**

6) 3.8 yd

Perimeter = **15.2 yd**