



Perimeter of Squares


Name _____

Score _____

PS:12


Find the perimeter of each square.

1)



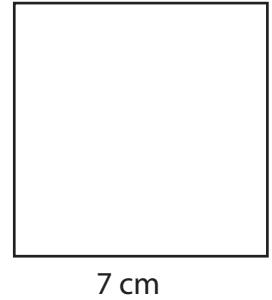
Perimeter =

2)



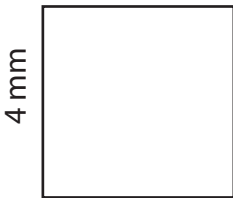
Perimeter =

3)




Perimeter =

4)



Perimeter =

5)



Perimeter =

6)



Perimeter =

Find the perimeter of each square from the given side length.

1) Side Length = 4 m

Perimeter =

2) Side Length = 33 m

Perimeter =

3) Side Length = 20 mm

Perimeter =

4) Side Length = 19 cm

Perimeter =



Perimeter of Squares

Name _____


Score _____

Answer key

PS:12

Find the perimeter of each square.


1)



Perimeter =

40 m

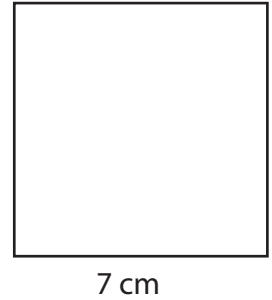
2)



Perimeter =

44 mm

3)



Perimeter =

28 cm


4)



Perimeter =

16 mm

5)



Perimeter =

32 cm

6)



Perimeter =

20 m

Find the perimeter of each square from the given side length.

1) Side Length = 4 m

Perimeter =

16 m

2) Side Length = 33 m

Perimeter =

132 m

3) Side Length = 20 mm

Perimeter =

80 mm

4) Side Length = 19 cm

Perimeter =

76 cm