



# Perimeter of Squares

Name \_\_\_\_\_

Score \_\_\_\_\_

PS:11

Find the perimeter of each square.

1)



Perimeter =

2)




Perimeter =

3)



Perimeter =

4)



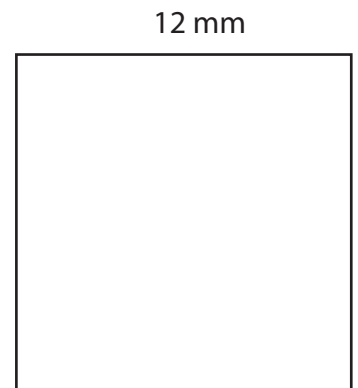
Perimeter =

5)



Perimeter =

6)



Perimeter =

Find the perimeter of each square from the given side length.

1) Side Length = 35 cm

Perimeter =

2) Side Length = 16 mm

Perimeter =

3) Side Length = 5 mm

Perimeter =

4) Side Length = 22 m

Perimeter =



# Perimeter of Squares

Name \_\_\_\_\_

Score \_\_\_\_\_

## Answer key

PS:11


Find the perimeter of each square.

1)



Perimeter = **28 mm**

2)




Perimeter = **12 cm**

3)



Perimeter = **36 m**

4)



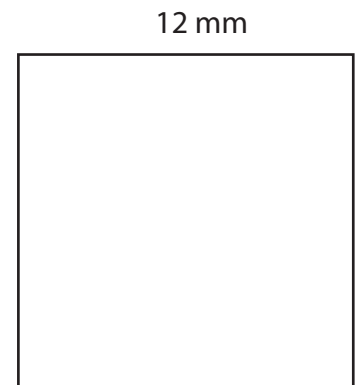
Perimeter = **4 cm**

5)



Perimeter = **24 m**

6)



Perimeter = **48 mm**

Find the perimeter of each square from the given side length.

1) Side Length = 35 cm

Perimeter = **140 cm**

2) Side Length = 16 mm

Perimeter = **64 mm**

3) Side Length = 5 mm

Perimeter = **20 mm**

4) Side Length = 22 m

Perimeter = **88 m**