



Perimeter of Squares

Name _____

Score _____

PS:10

Find the perimeter of each square.

1)



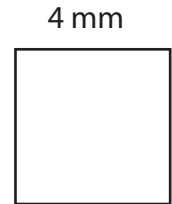
Perimeter =

2)



Perimeter =

3)




Perimeter =

4)



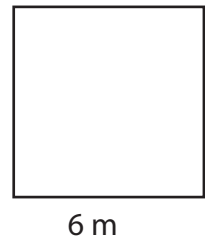
Perimeter =

5)



Perimeter =

6)



Perimeter =

Find the perimeter of each square from the given side length.

1) Side Length = 17 mm

Perimeter =

2) Side Length = 9 cm

Perimeter =

3) Side Length = 1 m

Perimeter =

4) Side Length = 30 mm

Perimeter =



Perimeter of Squares

Name _____

Score _____

Answer key

PS:10

Find the perimeter of each square.

1)



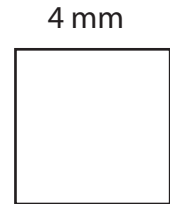
Perimeter = **8 cm**

2)




Perimeter = **44 m**

3)




Perimeter = **16 mm**

4)




Perimeter = **52 mm**

5)



Perimeter = **36 cm**

6)



Perimeter = **24 m**

Find the perimeter of each square from the given side length.

1) Side Length = 17 mm

Perimeter = **68 mm**

2) Side Length = 9 cm

Perimeter = **36 cm**

3) Side Length = 1 m

Perimeter = **4 m**

4) Side Length = 30 mm

Perimeter = **120 mm**