



Perimeter of Squares


Name _____

Score _____

PS:09

Find the perimeter of each square.

1) 20 yd



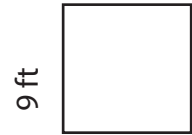
Perimeter = _____

2)




Perimeter = _____

3)



Perimeter = _____

4)




7 in

Perimeter = _____

5)

28 ft



Perimeter = _____

6)



Perimeter = _____

Find the perimeter of each square from side length. Complete the table.

Q. No	Side Length	Perimeter
1)	3 in	
2)	10 ft	
3)	18 yd	
4)	35 in	

Q. No	Side Length	Perimeter
1)	32 ft	
2)	15 yd	
3)	8 in	
4)	2 ft	



Perimeter of Squares

Name _____


Score _____

Answer key

PS:09

Find the perimeter of each square.

1) 20 yd



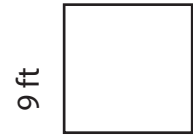
Perimeter = 80 yd

2)




Perimeter = 48 in

3)




Perimeter = 36 ft

4)



Perimeter = 28 in

5)



Perimeter = 112 ft

6)



Perimeter = 68 yd

Find the perimeter of each square from side length. Complete the table.

Q. No	Side Length	Perimeter
1)	3 in	12 in
2)	10 ft	40 ft
3)	18 yd	72 yd
4)	35 in	140 in

Q. No	Side Length	Perimeter
1)	32 ft	128 ft
2)	15 yd	60 yd
3)	8 in	32 in
4)	2 ft	8 ft