



Perimeter of Squares


Name _____

Score _____

PS:08

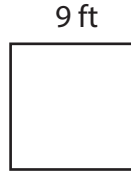
Find the perimeter of each square.

1)



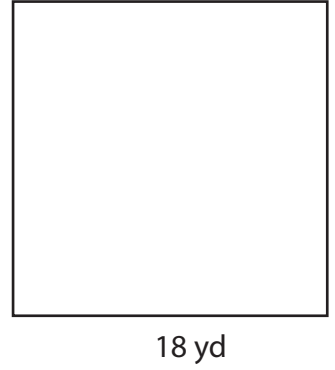
Perimeter = _____

2)




Perimeter = _____

3)



Perimeter = _____

4)



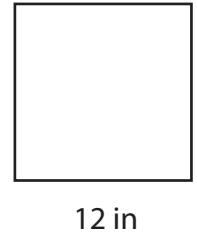
Perimeter = _____

5)



Perimeter = _____

6)



Perimeter = _____

Find the perimeter of each square from side length. Complete the table.

Q. No	Side Length	Perimeter
1)	16 ft	
2)	7 yd	
3)	25 in	
4)	19 ft	

Q. No	Side Length	Perimeter
1)	13 yd	
2)	1 in	
3)	22 ft	
4)	30 yd	



Perimeter of Squares

Name _____


Score _____

Answer key

PS:08

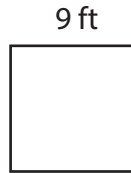
Find the perimeter of each square.

1)




Perimeter = 60 in

2)



Perimeter = 36 ft

3)



Perimeter = 72 yd

4)




Perimeter = 84 ft

5)



Perimeter = 56 yd

6)



Perimeter = 48 in

Find the perimeter of each square from side length. Complete the table.

Q. No	Side Length	Perimeter
1)	16 ft	64 ft
2)	7 yd	28 yd
3)	25 in	100 in
4)	19 ft	76 ft

Q. No	Side Length	Perimeter
1)	13 yd	52 yd
2)	1 in	4 in
3)	22 ft	88 ft
4)	30 yd	120 yd