



DRAWING TALLY MARKS & PICTOGRAPH

Name _____


Score _____

PGS:20

Use the data given below to draw Tally marks and Pictograph.

9, 7, 9, 3, 4, 3, 3, 4, 7, 3, 7, 9, 7, 7, 3, 4, 4, 3, 7, 7, 9, 8, 7, 7, 3,
8, 7, 8, 7, 4, 3, 7, 4, 7, 3, 4, 8, 4, 7, 3, 4, 4, 3, 3, 4, 7, 4, 7, 4, 7,
7, 4, 4, 7, 4, 7

9	
7	
3	
4	
8	

 = 4 key

9	
7	
3	
4	
8	



DRAWING TALLY MARKS & PICTOGRAPH

Name _____

Score _____


Answer key














PGS:20

Use the data given below to draw Tally marks and Pictograph.

9, 7, 9, 3, 4, 3, 3, 4, 7, 3, 7, 9, 7, 7, 3, 4, 4, 3, 7, 7, 9, 8, 7, 7, 3,
 8, 7, 8, 7, 4, 3, 7, 4, 7, 3, 4, 8, 4, 7, 3, 4, 4, 3, 3, 4, 7, 4, 7, 4, 7,
 7, 4, 4, 7, 4, 7

9	
7	/ / / /
3	/ /
4	/ / /
8	

 = 4 key

9	
7	    
3	  
4	   
8	