



DRAWING PICTOGRAPH

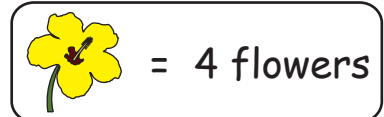
Name _____

Score _____

PGS:15

Mrs.Rebecca has a floral garden in her backyard. Ray, her son counts the number of flowers bloomed every morning. Use the following information to know the flowers bloomed for 5 days. Represent it on a pictograph.

Day 1 - 20 Day 2 - 8 Day 3 - 16
Day 4 - 4 Day 5 - 8



Day 1	
Day 2	
Day 3	
Day 4	
Day 5	

- 1) How many flowers bloomed on Day 2 and Day 3?
- 2) How many days did more than 10 flowers bloom?
- 3) Eight flowers bloomed on Day 5. True or false?
- 4) What is the total number of flowers bloomed in all 5 days?
- 5) Ray counts 20 flowers. Which day saw 20 flowers?



DRAWING PICTOGRAPH

Name _____


Score _____






Answer key

PGS:15

Mrs.Rebecca has a floral garden in her backyard. Ray, her son counts the number of flowers bloomed every morning. Use the following information to know the flowers bloomed for 5 days. Represent it on a pictograph.

Day 1 - 20	Day 2 - 8	Day 3 - 16
Day 4 - 4	Day 5 - 8	

 = 4 flowers

Day 1	
Day 2	
Day 3	
Day 4	
Day 5	

1) How many flowers bloomed on Day 2 and Day 3?

8, 16

2) How many days did more than 10 flowers bloom?

2 days

3) Eight flowers bloomed on Day 5. True or false?

True

4) What is the total number of flowers bloomed in all 5 days?

56

5) Ray counts 20 flowers. Which day saw 20 flowers?

Day 1