



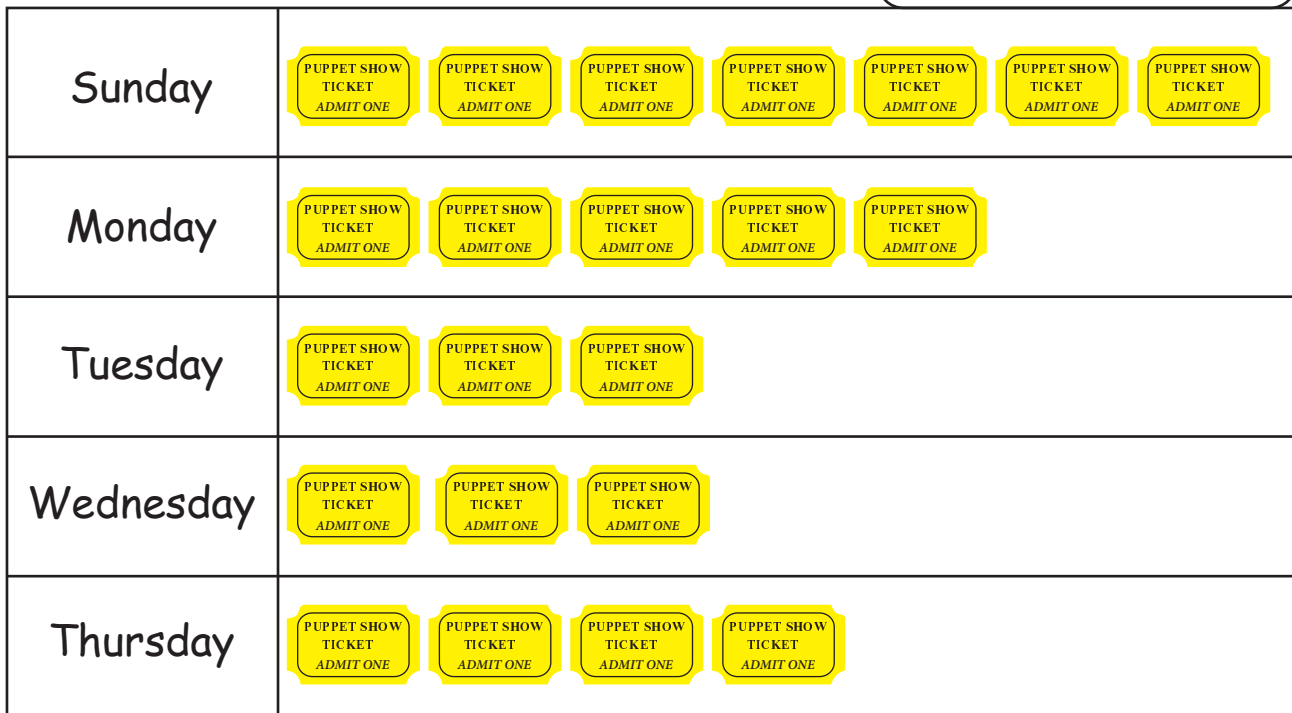
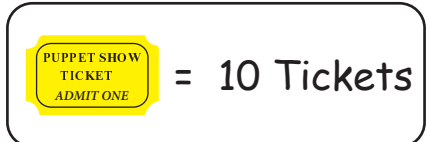
PUPPET SHOW TICKETS PICTOGRAPH

Name _____

Score _____

PGS:07

Martha organizes a Puppet show at the school carnival. The carnival is held for 5 days. The number of tickets sold are shown on a pictograph. Use the key and answer the questions that follow.



1) How many tickets were sold on Monday?

2) Which two days sold a total of 60 tickets?

3) How many more tickets were sold on Sunday than Thursday?

4) If 40 more tickets would have been sold on Wednesday, would it be equal to the Sunday's sales?

5) How many tickets were sold in all?



PUPPET SHOW TICKETS PICTOGRAPH

Name _____


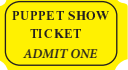
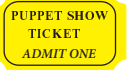
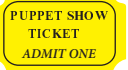
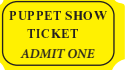
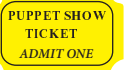

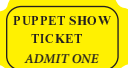

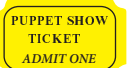
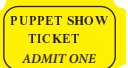
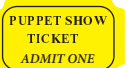
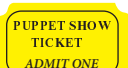
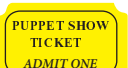
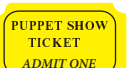
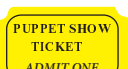
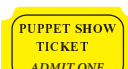
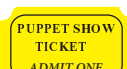
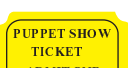
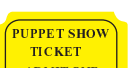
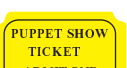
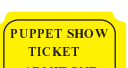
Score _____

PGS:07

Answer key

Martha organizes a Puppet show at the school carnival. The carnival is held for 5 days. The number of tickets sold are shown on a pictograph. Use the key and answer the questions that follow.

 = 10 Tickets

Sunday	      
Monday	    
Tuesday	  
Wednesday	  
Thursday	   

1) How many tickets were sold on Monday?

50

2) Which two days sold a total of 60 tickets?

Tuesday
Wednesday

3) How many more tickets were sold on Sunday than Thursday?

30

4) If 40 more tickets would have been sold on Wednesday, would it be equal to the Sunday's sales?

Yes

5) How many tickets were sold in all?

220