








# PET SHOP PICTOGRAPH

Name \_\_\_\_\_

Score \_\_\_\_\_

PGS:02

Kennet visits a small pet store near his house. He plans to gift his sister a pet for her birthday. Look at the pictograph below and you will know the different kind of pet animals in the pet store.

Parrot	
Dog	
Cat	
Rabbit	
Cockatiel	

1) How many parrots were in the cage?

2) The pet store only has 3 of these.  
Which is that pet?

3) There are \_\_\_\_\_ more rabbits than kittens.

4) How many birds in all did the store keep?

5) There are only \_\_\_\_\_ dogs.



# PET SHOP PICTOGRAPH






Name \_\_\_\_\_

Score \_\_\_\_\_

PGS:02

## Answer key

Kennet visits a small pet store near his house. He plans to gift his sister a pet for her birthday. Look at the pictograph below and you will know the different kind of pet animals in the pet store.

Parrot	
Dog	
Cat	
Rabbit	
Cockatiel	

1) How many parrots were in the cage?

**5**

2) The pet store only has 3 of these.  
Which is that pet?

**Cockatiel**

3) There are 5 more rabbits than kittens.

4) How many birds in all did the store keep?

**8**

5) There are only 4 dogs.