



Adjacent Angles

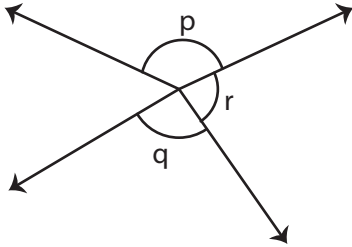
Name _____

Score _____

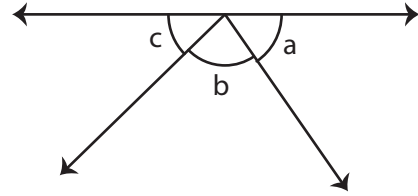
PA:15

Identify the pairs of adjacent angles in each question.

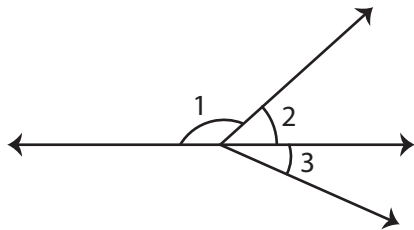
1)



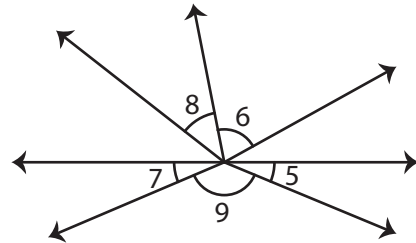
2)



3)



4)



Q.No	Figure	Pairs of adjacent angles
5)		
6)		



Adjacent Angles

Name _____

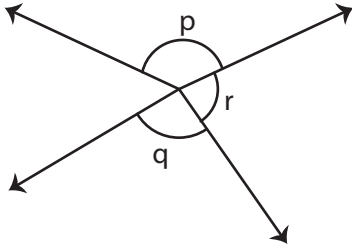
Score _____

Answer key

PA:15

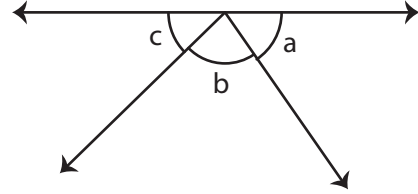
Identify the pairs of adjacent angles in each question.

1)



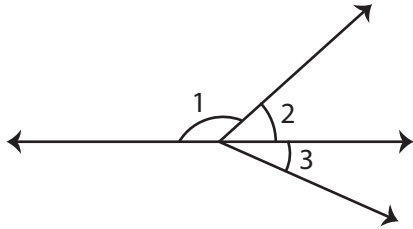
$\angle p, \angle r$; $\angle q, \angle s$

2)



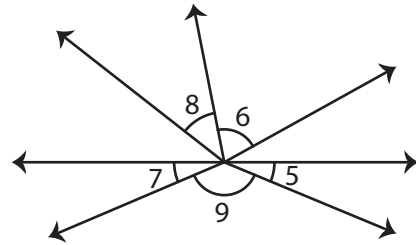
$\angle a, \angle b$; $\angle b, \angle c$

3)



$\angle 1, \angle 2$; $\angle 2, \angle 3$

4)



$\angle 6, \angle 8$; $\angle 5, \angle 9$; $\angle 7, \angle 9$

Q.No	Figure	Pairs of adjacent angles
5)		$\angle e, \angle h$ $\angle f, \angle h$ $\angle d, \angle g$
6)		$\angle 1, \angle 3$ $\angle 3, \angle 5$ $\angle 5, \angle 4$ $\angle 4, \angle 2$