



Adjacent Angles

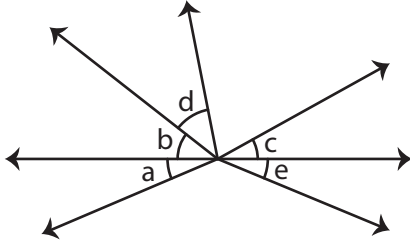
Name _____

Score _____

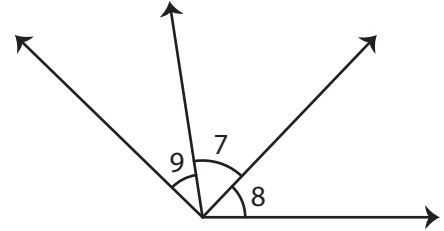
PA:14

Identify the pairs of adjacent angles in each question.

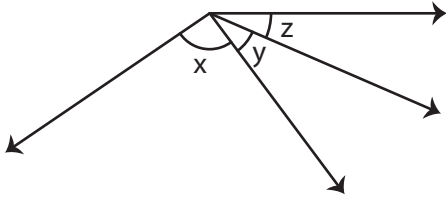
1)



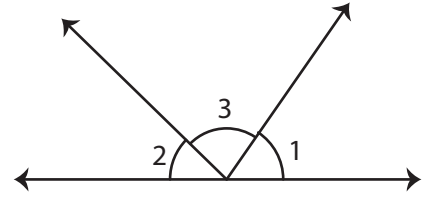
2)



3)



4)



Q.No	Figure	Pairs of adjacent angles
5)		
6)		



Adjacent Angles

Name _____

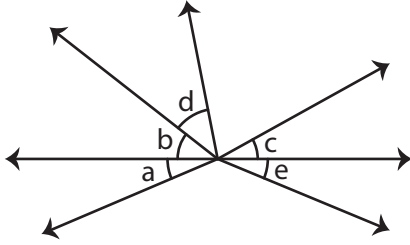
Score _____

Answer key

PA:14

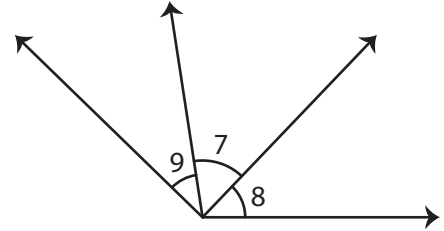
Identify the pairs of adjacent angles in each question.

1)



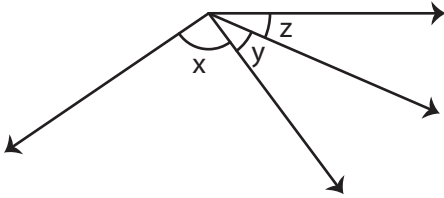
$\angle a, \angle b$; $\angle b, \angle d$; $\angle c, \angle e$

2)



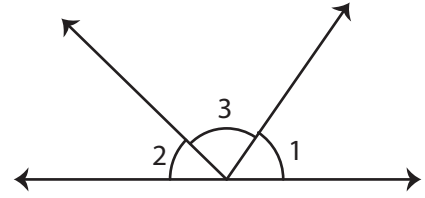
$\angle 7, \angle 8$; $\angle 7, \angle 9$

3)



$\angle x, \angle y$; $\angle y, \angle z$

4)



$\angle 1, \angle 3$; $\angle 2, \angle 3$

Q.No	Figure	Pairs of adjacent angles
5)		$\angle 4, \angle 5$ $\angle 4, \angle 6$
6)		$\angle f, \angle g$ $\angle g, \angle h$ $\angle u, \angle v$ $\angle v, \angle w$