



Adjacent Angles

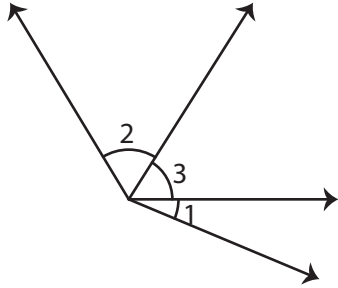
Name _____

Score _____

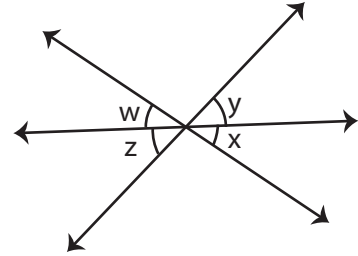
PA:13

Identify the pairs of adjacent angles in each question.

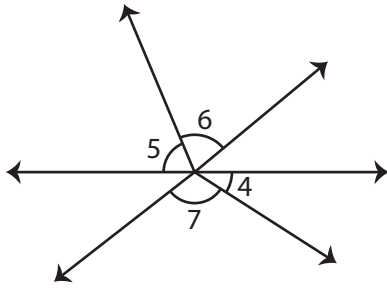
1)



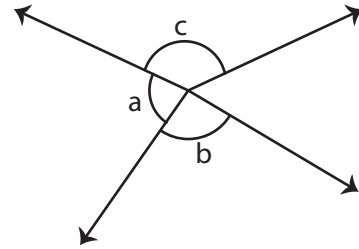
2)



3)



4)



Q.No	Figure	Pairs of adjacent angles
5)		
6)		



Adjacent Angles

Name _____

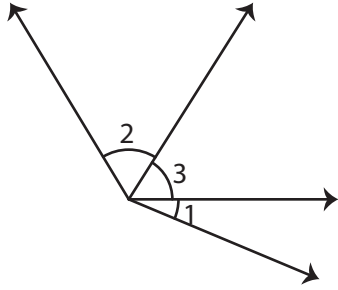
Score _____

Answer key

PA:13

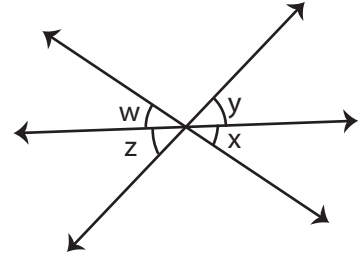
Identify the pairs of adjacent angles in each question.

1)



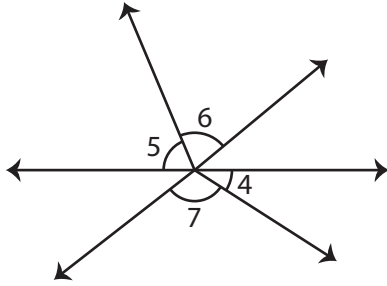
$\angle 1, \angle 3$; $\angle 2, \angle 3$

2)



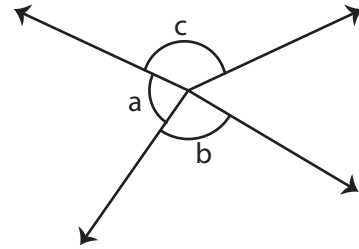
$\angle x, \angle y$; $\angle z, \angle w$

3)



$\angle 4, \angle 7$; $\angle 5, \angle 6$

4)



$\angle a, \angle b$; $\angle a, \angle c$

Q.No	Figure	Pairs of adjacent angles
5)		$\angle p, \angle s$ $\angle q, \angle r$ $\angle s, \angle t$ $\angle t, \angle r$
6)		$\angle 2, \angle 5$ $\angle 3, \angle 4$