



Adjacent Angles

Name _____

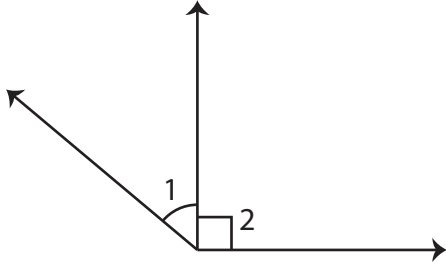
Score _____

PA:10

Identify whether the pair of angles are adjacent.

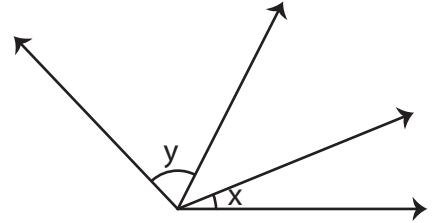
(Adjacent angles: Two angles which share a common vertex and a common side)

1)



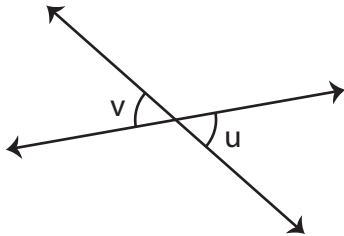
- a) adjacent b) not adjacent

2)



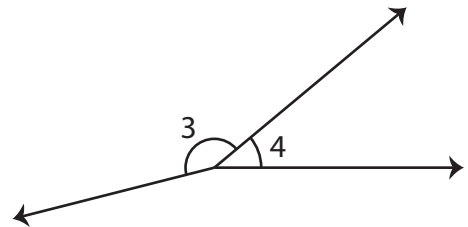
- a) adjacent b) not adjacent

3)



- a) adjacent b) not adjacent

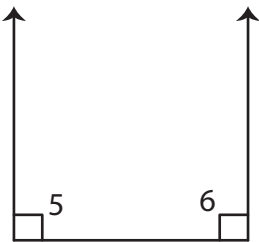
4)



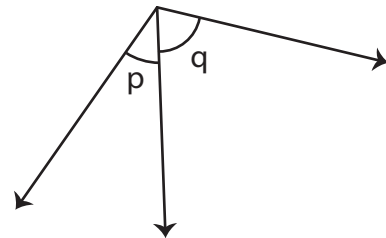
- a) adjacent b) not adjacent

Write whether the given pair of angles are adjacent or not.

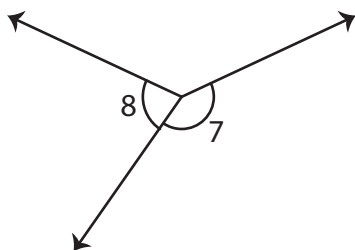
1)



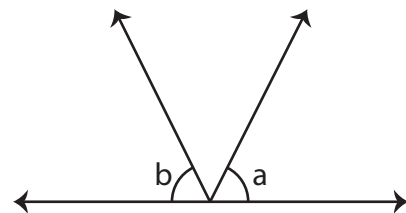
2)



3)



4)





Adjacent Angles

Name _____

Score _____

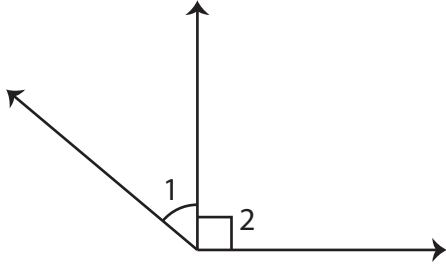
Answer key

PA:10

Identify whether the pair of angles are adjacent.

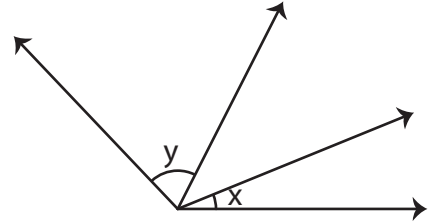
(Adjacent angles: Two angles which share a common vertex and a common side)

1)



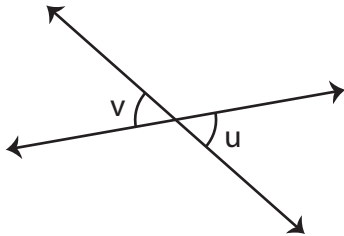
~~a)~~ adjacent b) not adjacent

2)



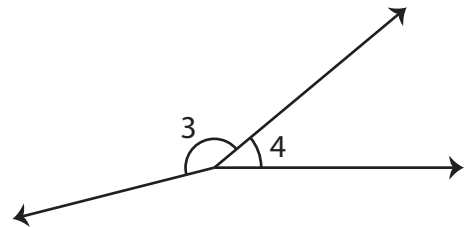
a) adjacent ~~b)~~ not adjacent

3)



a) adjacent ~~b)~~ not adjacent

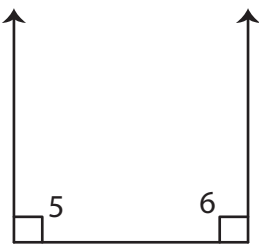
4)



~~a)~~ adjacent b) not adjacent

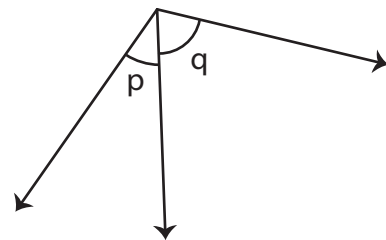
Write whether the given pair of angles are adjacent or not.

1)



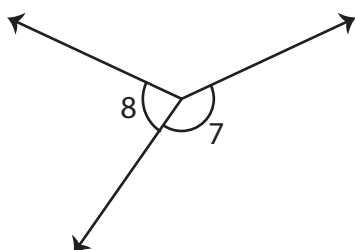
not adjacent

2)



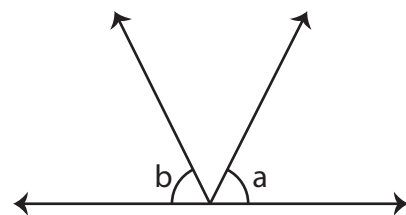
adjacent

3)



adjacent

4)



not adjacent