



Multiplication Arrays

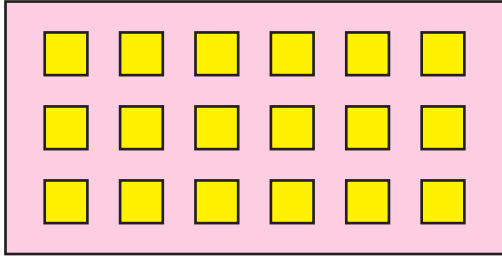
Name _____

Score _____


MS:III:02

Count the number of columns and rows to represent each array and find the total number of objects.


1)



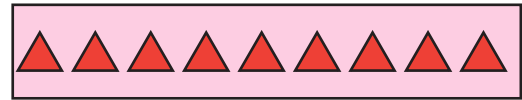
2)




3)



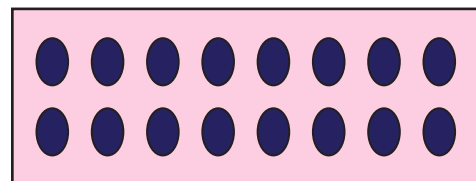
4)



5)



6)





Multiplication Arrays

Answer key

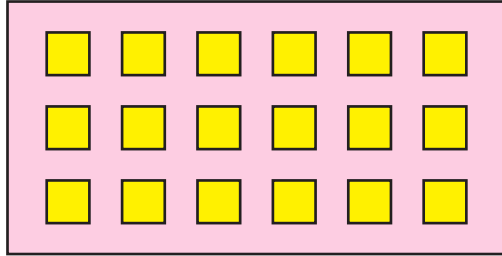
Name _____

Score _____

MS:III:02

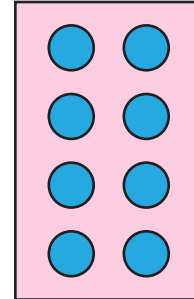
Count the number of columns and rows to represent each array and find the total number of objects.

1)




$$3 \times 6 = 18$$

2)



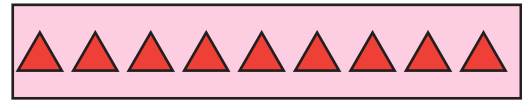
$$4 \times 2 = 8$$

3)




$$5 \times 3 = 15$$

4)



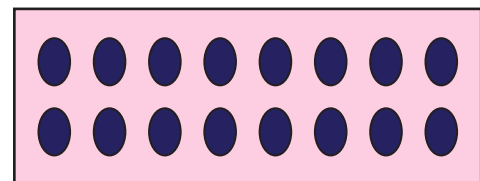
$$1 \times 10 = 10$$

5)



$$7 \times 4 = 28$$

6)



$$2 \times 8 = 16$$