



# Multiplication Arrays


Name \_\_\_\_\_

Score \_\_\_\_\_

MS:III:01

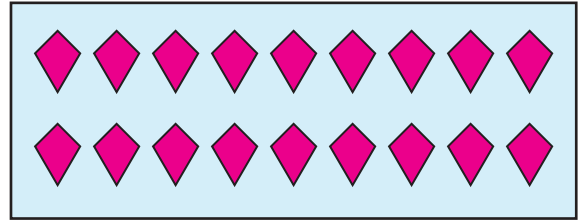
Count the number of columns and rows to represent each array and find the total number of objects.

1)



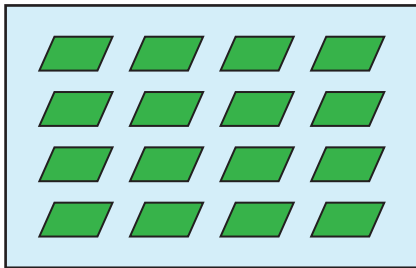
$$5 \times 2 = 10$$

2)



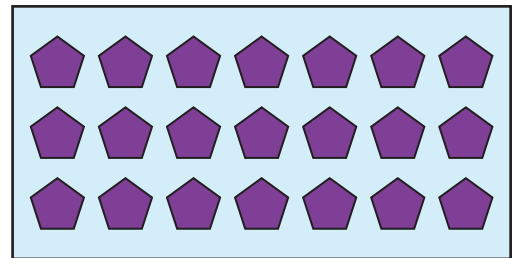
\_\_\_\_\_

3)



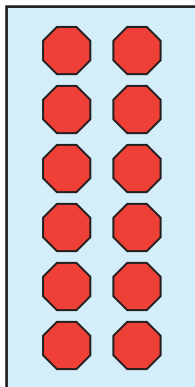
\_\_\_\_\_

4)



\_\_\_\_\_

5)



\_\_\_\_\_

6)



\_\_\_\_\_



# Multiplication Arrays

Answer key


Name \_\_\_\_\_

Score \_\_\_\_\_

MS:III:01

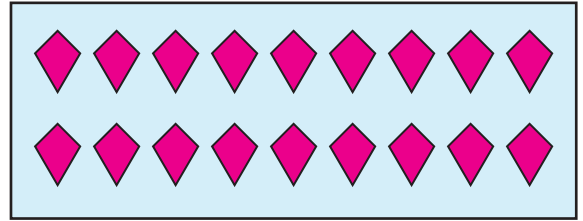
Count the number of columns and rows to represent each array and find the total number of objects.

1)



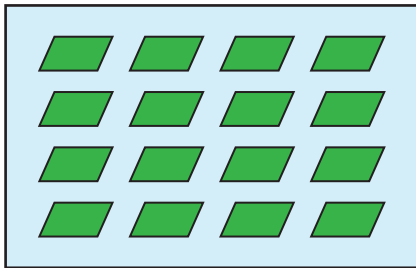
$$5 \times 2 = 10$$

2)



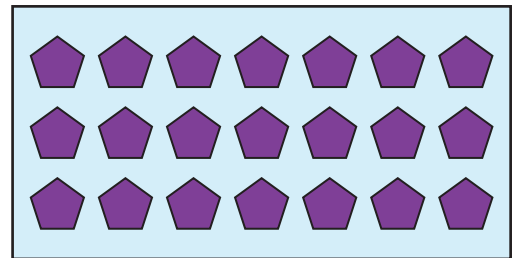
$$2 \times 9 = 18$$

3)



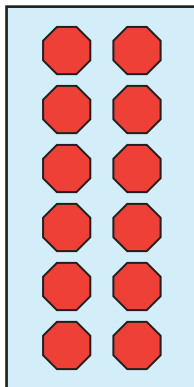
$$4 \times 4 = 16$$

4)



$$3 \times 7 = 21$$

5)



$$6 \times 2 = 12$$

6)



$$1 \times 8 = 8$$