



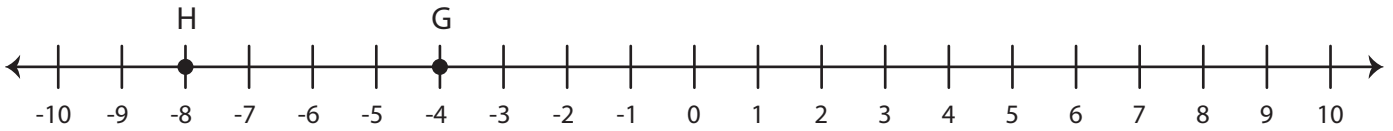
# Finding Midpoints

Name \_\_\_\_\_

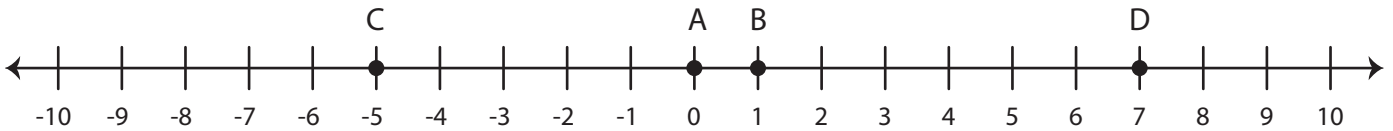
Score \_\_\_\_\_

MP:02

1) What will be the midpoint of segment GH? \_\_\_\_\_



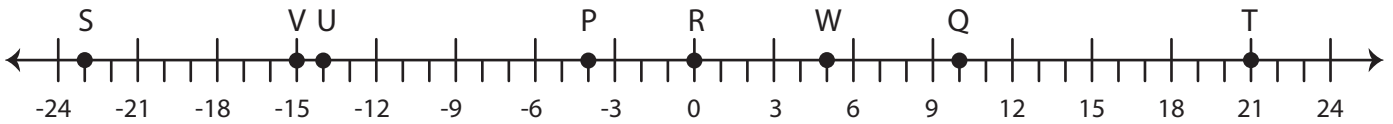
2) Which alphabet represents the midpoint of segment CD? \_\_\_\_\_



3) Which is the midpoint of segment MN? \_\_\_\_\_



4) Find the midpoints using the number line.



a) Midpoint of  $\overline{ST}$  :

d) Midpoint of  $\overline{VW}$  :

b) Midpoint of  $\overline{PQ}$  :

e) Midpoint of  $\overline{QR}$  :

c) Midpoint of  $\overline{VT}$  :

f) Midpoint of  $\overline{RU}$  :



# Finding Midpoints

Name \_\_\_\_\_

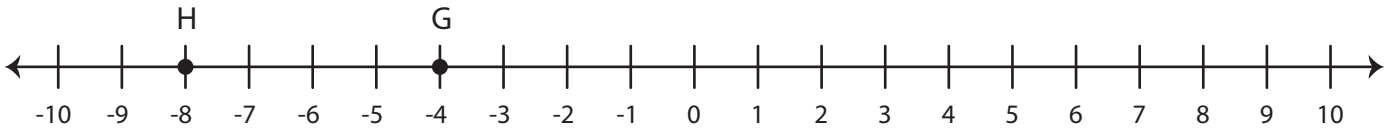
Score \_\_\_\_\_

## Answer key

MP:02

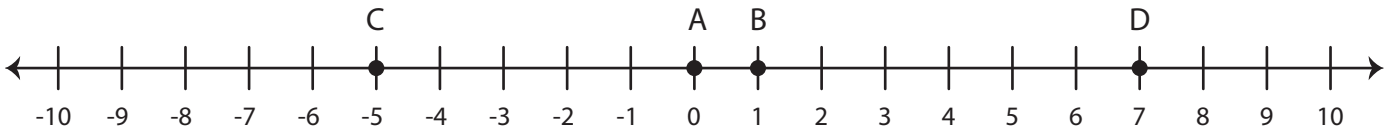
1) What will be the midpoint of segment GH?

-6



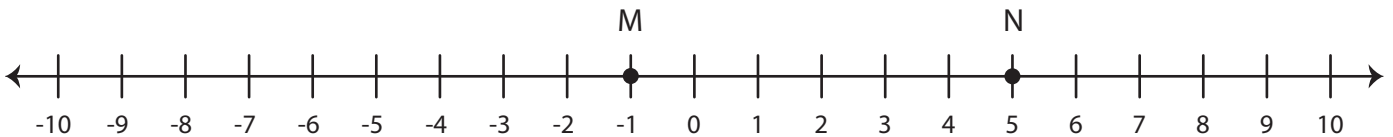
2) Which alphabet represents the midpoint of segment CD?

B

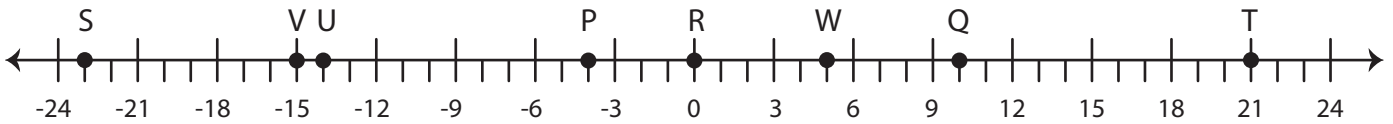


3) Which is the midpoint of segment MN?

2



4) Find the midpoints using the number line.



a) Midpoint of  $\overline{ST}$  :

-1

d) Midpoint of  $\overline{VW}$  :

-5

b) Midpoint of  $\overline{PQ}$  :

3

e) Midpoint of  $\overline{QR}$  :

5

c) Midpoint of  $\overline{VT}$  :

3

f) Midpoint of  $\overline{RU}$  :

-7