



Area of Kites

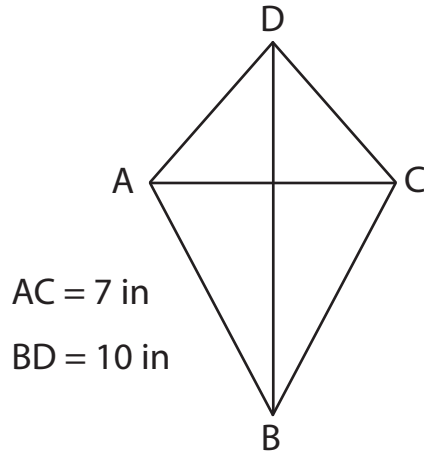
Name _____

Score _____

KK:13

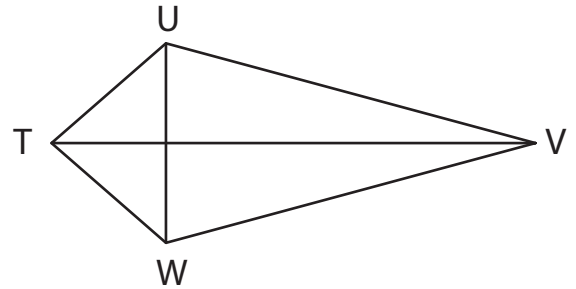
Find the area of each kite.

1)



Area =

2)



Area =

Find the area of each kite. Complete the table.

Q.No	Diagonal 1	Diagonal 2	Area
1)	12 yd	15 yd	
2)	7 ft	4 ft	
3)	16 in	11 in	
4)	2 yd	3 yd	
5)	13 in	17 in	



Area of Kites

Name _____

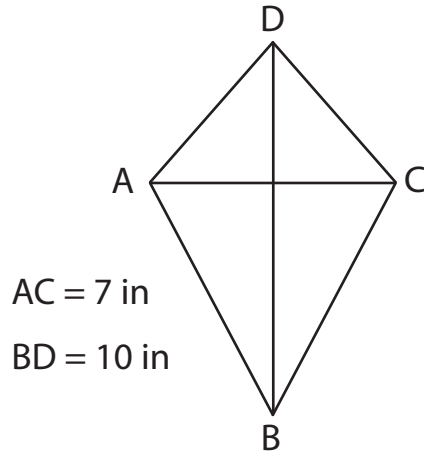
Score _____

Answer key

KK:13

Find the area of each kite.

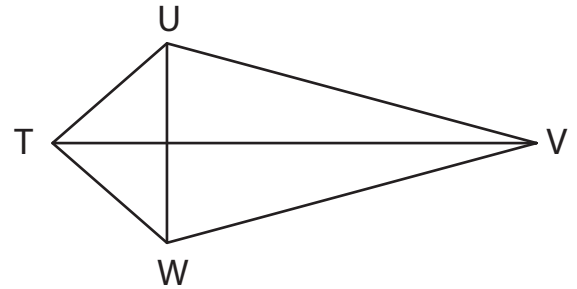
1)



Area =

35 in²

2)



Area =

32.5 ft²

Find the area of each kite. Complete the table.

Q.No	Diagonal 1	Diagonal 2	Area
1)	12 yd	15 yd	90 yd²
2)	7 ft	4 ft	14 ft²
3)	16 in	11 in	88 in²
4)	2 yd	3 yd	3 yd²
5)	13 in	17 in	110.5 in²