



# Naming Quadrilaterals

Name \_\_\_\_\_

Score \_\_\_\_\_

IQ:15

Name the quadrilateral.

1)



\_\_\_\_\_

2)



\_\_\_\_\_

3)




\_\_\_\_\_

4)




\_\_\_\_\_

5)



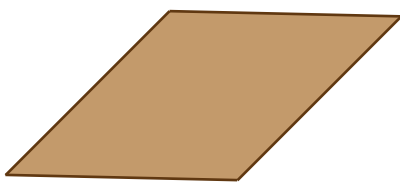
\_\_\_\_\_

6)




\_\_\_\_\_

7)



\_\_\_\_\_

8)



\_\_\_\_\_



# Naming Quadrilaterals

Name \_\_\_\_\_

Score \_\_\_\_\_

Answer key

IQ:15

Name the quadrilateral.

1)



**Trapezoid**

---

2)



**Square**

---

3)



**Rectangle**

---


4)



**Parallelogram**

---


5)



**Quadrilateral**

---

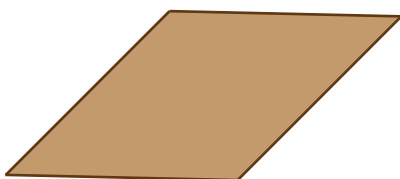
6)



**Kite**

---


7)



**Rhombus**

---

8)



**Quadrilateral**

---