



# Naming Quadrilaterals

Name \_\_\_\_\_

Score \_\_\_\_\_

IQ:14

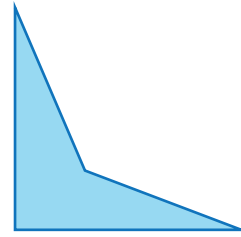
Name the quadrilateral.

1)




\_\_\_\_\_

2)




\_\_\_\_\_

3)




\_\_\_\_\_

4)



\_\_\_\_\_

5)




\_\_\_\_\_

6)



\_\_\_\_\_

7)



\_\_\_\_\_

8)



\_\_\_\_\_



# Naming Quadrilaterals

Name \_\_\_\_\_

Score \_\_\_\_\_

Answer key

IQ:14

Name the quadrilateral.

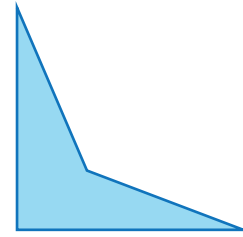
1)



**Rectangle**

---


2)



**Quadrilateral**

---


3)



**Rhombus**

---


4)



**Trapezoid**

---

5)



**Kite**

---


6)



**Square**

---

7)



**Quadrilateral**

---

8)



**Parallelogram**

---