



Naming Quadrilaterals

Name _____

Score _____


IQ:13

Name the quadrilateral.


1)



3)



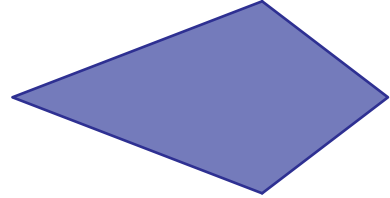
5)



7)



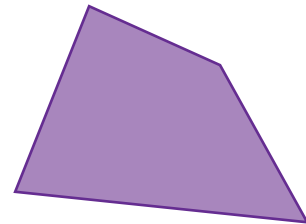
2)



4)



6)



8)





Naming Quadrilaterals

Name _____

Score _____

Answer key

IQ:13

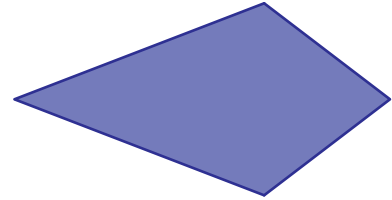
Name the quadrilateral.

1)




Parallelogram

2)



Kite

3)




Quadrilateral

4)



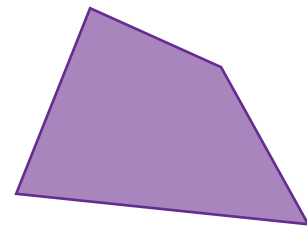
Rectangle

5)



Square

6)



Quadrilateral

7)



Trapezoid

8)



Rhombus
