



## Halloween picture subtraction

Name \_\_\_\_\_


Score \_\_\_\_\_

HD:14



Count and subtract the objects. Write the difference in the boxes given below.

1)  -  =

2)  -  =

3)  -  =

4)  -  =

5)  -  =



## Halloween picture subtraction

Name \_\_\_\_\_

Score \_\_\_\_\_

### Answer key

HD:14



Count and subtract the objects. Write the difference in the boxes given below.

1)  -  = 9

2)  -  = 1

3)  -  = 3

4)  -  = 2

5)  -  = 6