



# Line, Ray, Line segment, Plane

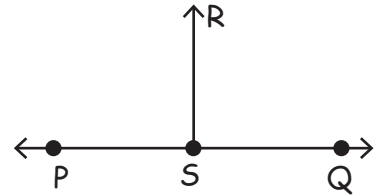
Name \_\_\_\_\_

Score \_\_\_\_\_

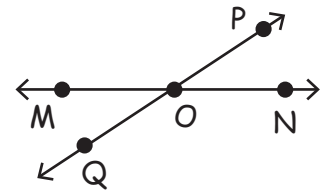
GSL09

Match the following.

1) Ray ●



2) Line segment ●



3) Perpendicular lines ●




4) Line ●



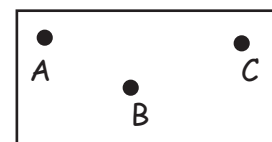
5) Parallel lines ●



6) Plane ●



7) Intersecting lines ●





# Line, Ray, Line segment, Plane

Name \_\_\_\_\_

Score \_\_\_\_\_

## Answer key

GSL09

Match the following.

1) Ray

2) Line segment

3) Perpendicular lines

4) Line

5) Parallel lines

6) Plane

7) Intersecting lines

