




Identify Shapes

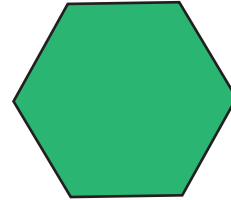
Name _____

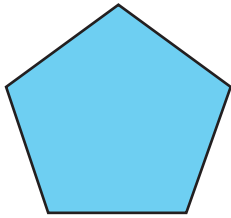
Score _____

GS:I:18


Identify and pick the names of the shapes given below.













<i>Hexagon</i>	<i>Trapezoid</i>	<i>Pentagon</i>
<i>Circle</i>	<i>Oval</i>	<i>Triangle</i>
		<i>Parallelogram</i>



Identify Shapes


Name _____

Score _____

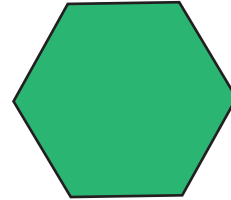
Answer key

GS:I:18

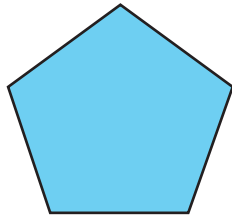
Identify and pick the names of the shapes given below.



Triangle




Hexagon



Pentagon



Trapezoid



Oval



Parallelogram

<i>Hexagon</i>	<i>Trapezoid</i>	<i>Pentagon</i>
<i>Circle</i>	<i>Oval</i>	<i>Parallelogram</i>
		<i>Triangle</i>