



Matching Shapes

Name _____


Score _____

GS:I:14

Match the 2D names with its respective shapes.

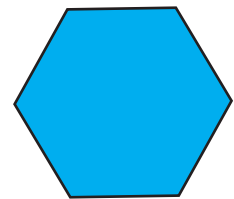
1)

Rhombus ●




2)

Oval ●




3)

Hexagon ●




4)

Pentagon ●



5)

Trapezoid ●





Matching Shapes

Name _____

Score _____


Answer key

GS:I:14

Match the 2D names with its respective shapes.

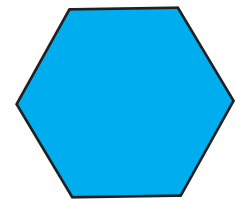
1)

Rhombus




2)

Oval




3)

Hexagon



4)

Pentagon



5)

Trapezoid

