



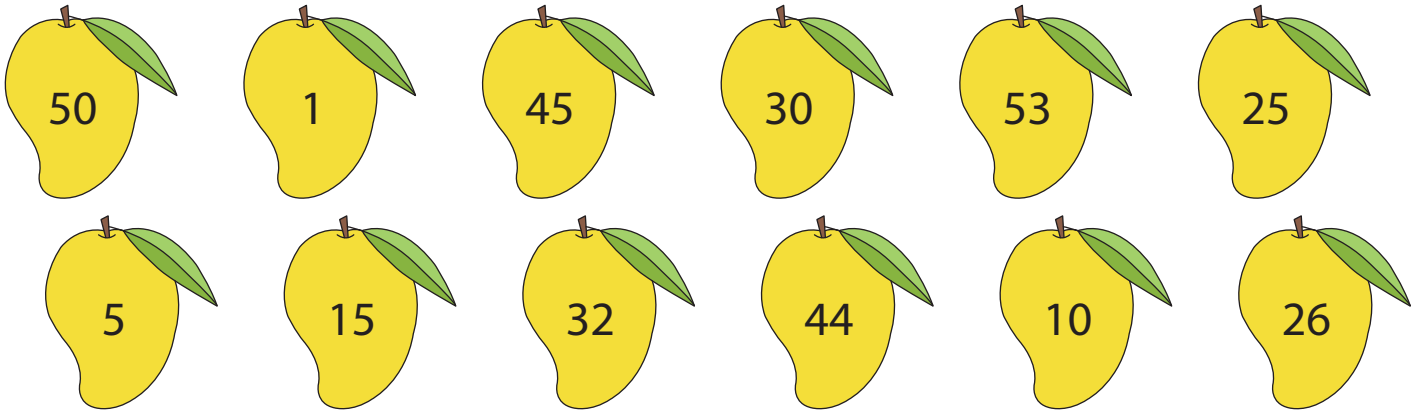
# MULTIPLES OF NUMBERS

Name \_\_\_\_\_


Score \_\_\_\_\_

FT:16

Check mark the mangoes that are multiples of 5.



Check mark the leaves that are multiples of 13.



Write the first five multiples of each number.

- |    |    |       |       |       |       |       |
|----|----|-------|-------|-------|-------|-------|
| 1) | 16 | _____ | _____ | _____ | _____ | _____ |
| 2) | 15 | _____ | _____ | _____ | _____ | _____ |
| 3) | 2  | _____ | _____ | _____ | _____ | _____ |
| 4) | 9  | _____ | _____ | _____ | _____ | _____ |



# MULTIPLES OF NUMBERS

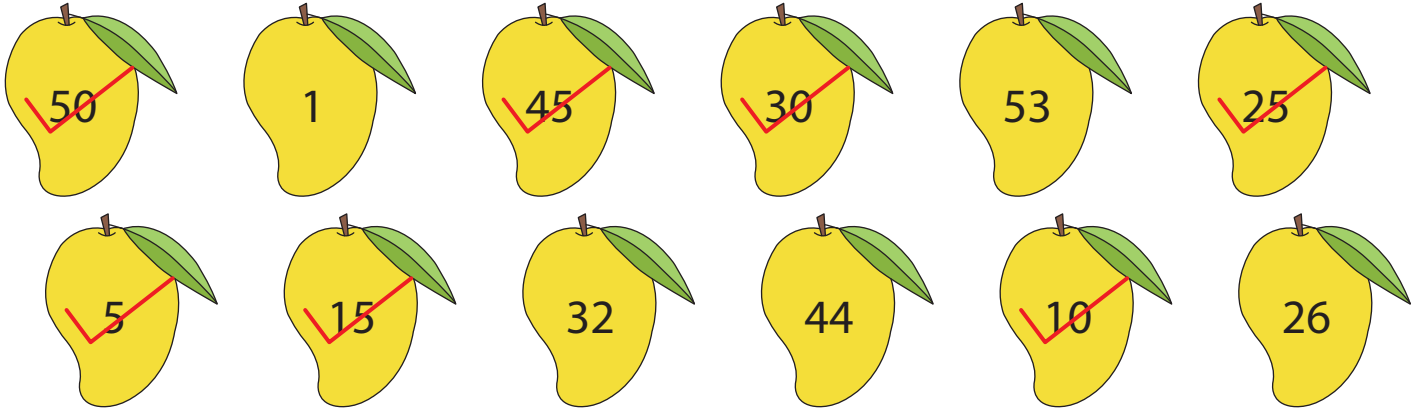
Name \_\_\_\_\_

Score \_\_\_\_\_


## Answer key

FT:16

Check mark the mangoes that are multiples of 5.



Check mark the leaves that are multiples of 13.



Write the first five multiples of each number.

- |    |    |           |           |           |           |           |
|----|----|-----------|-----------|-----------|-----------|-----------|
| 1) | 16 | <u>16</u> | <u>32</u> | <u>48</u> | <u>64</u> | <u>80</u> |
| 2) | 15 | <u>15</u> | <u>30</u> | <u>45</u> | <u>60</u> | <u>75</u> |
| 3) | 2  | <u>2</u>  | <u>4</u>  | <u>6</u>  | <u>8</u>  | <u>10</u> |
| 4) | 9  | <u>9</u>  | <u>18</u> | <u>27</u> | <u>36</u> | <u>45</u> |