



# MULTIPLES OF NUMBERS

Name \_\_\_\_\_





Score \_\_\_\_\_

FT:14

Check mark the pots that are multiples of 9.



Check mark the balloons that are multiples of 6.



Write the first five multiples of each number.

1) 10    \_\_\_\_\_

2) 4    \_\_\_\_\_

3) 17    \_\_\_\_\_

4) 8    \_\_\_\_\_



# MULTIPLES OF NUMBERS

Name \_\_\_\_\_

Score \_\_\_\_\_







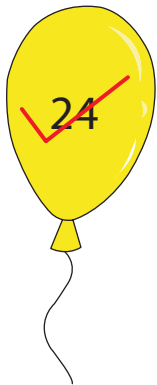
## Answer key

FT:14

Check mark the pots that are multiples of 9.



Check mark the balloons that are multiples of 6.



Write the first five multiples of each number.

1) 10    10    20    30    40    50

2) 4    4    8    12    16    20

3) 17    17    34    51    68    85

4) 8    8    16    24    32    40