



Estimating Time - Seconds, Minutes and Hours

Name _____

Score _____

ET:10


Estimate the time-seconds, minutes or hours to perform each work.

Clapping hands



Seconds / Minutes / Hours

Watching a movie




Seconds / Minutes / Hours

Cleaning the fish tank



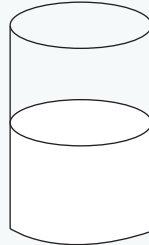
Seconds / Minutes / Hours

Writing a letter




Seconds / Minutes / Hours

Drinking a glass of milk



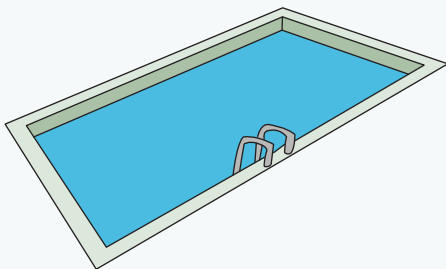
Seconds / Minutes / Hours

Going on a long journey



Seconds / Minutes / Hours

Swimming class




Seconds / Minutes / Hours

Watering plants



Seconds / Minutes / Hours

Sharpening a pencil



Seconds / Minutes / Hours



Estimating Time - Seconds, Minutes and Hours

Name _____

Score _____

Answer key

ET:10


Estimate the time-seconds, minutes or hours to perform each work.

Clapping hands



~~Seconds~~ / Minutes / Hours

Watching a movie




Seconds / Minutes / ~~Hours~~

Cleaning the fish tank



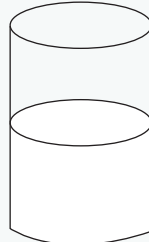
Seconds / ~~Minutes~~ / Hours

Writing a letter




Seconds / ~~Minutes~~ / Hours

Drinking a glass of milk



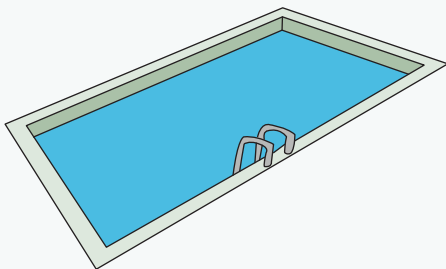
~~Seconds~~ / Minutes / Hours

Going on a long journey



Seconds / Minutes / ~~Hours~~

Swimming class




Seconds / Minutes / ~~Hours~~

Watering plants



Seconds / ~~Minutes~~ / Hours

Sharpening a pencil



~~Seconds~~ / Minutes / Hours