



# Estimating Time

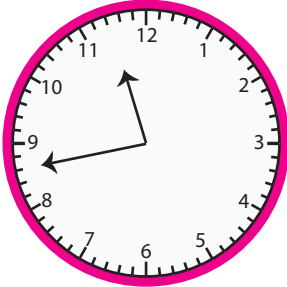
Name \_\_\_\_\_

Score \_\_\_\_\_

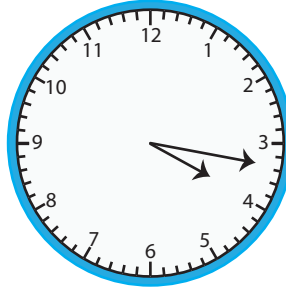
ET:09

Estimate the time by rounding the values to the nearest quarter hour.

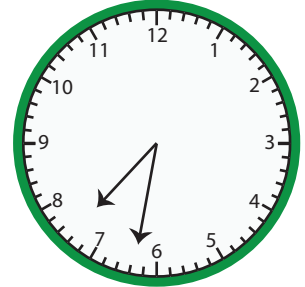
1)




2)



3)



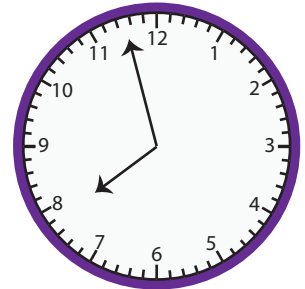
4)



5)



6)



7)



\_\_\_\_\_

8)



\_\_\_\_\_

9)



\_\_\_\_\_

10)



\_\_\_\_\_

11)



\_\_\_\_\_

12)



\_\_\_\_\_



# Estimating Time

Name \_\_\_\_\_

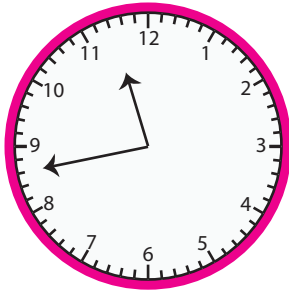
Score \_\_\_\_\_

## Answer key

ET:09

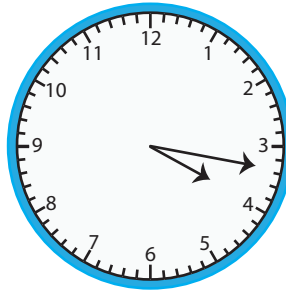
Estimate the time by rounding the values to the nearest quarter hour.

1)



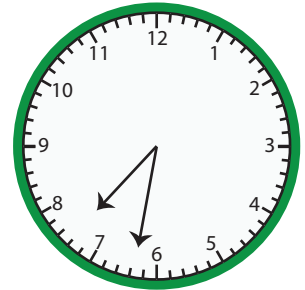
**11:45**

2)




**04:15**

3)



**07:30**

4)



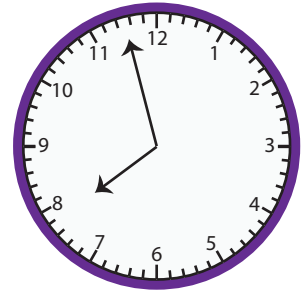
**01:45**

5)



**10:15**

6)



**08:00**

7)



**12:15**

8)



**06:30**

9)



**03:45**

10)



**09:00**

11)



**02:45**

12)



**05:15**