



Estimating Time


Name _____

Score _____

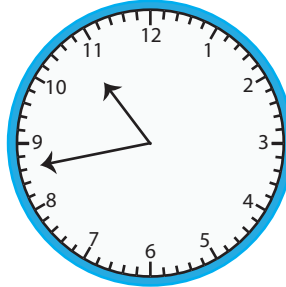
ET:08

Estimate the time by rounding the values to the nearest quarter hour.

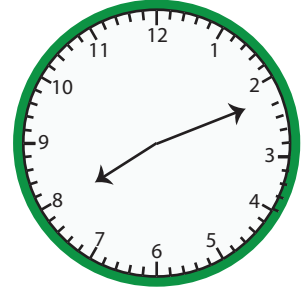
1)



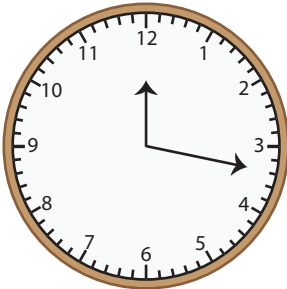
2)



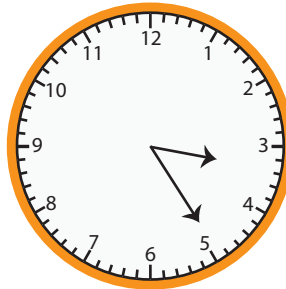
3)



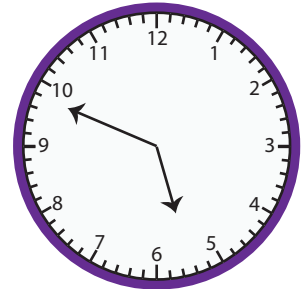
4)



5)



6)



7)



8)



9)



10)



11)



12)





Estimating Time

Name _____


Score _____

Answer key

ET:08

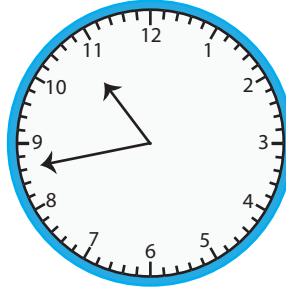
Estimate the time by rounding the values to the nearest quarter hour.

1)



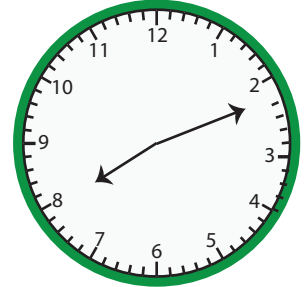
01:00

2)



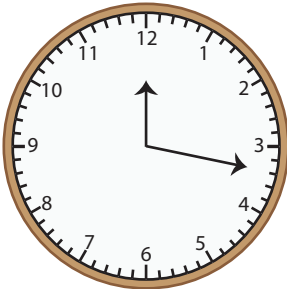
10:45

3)



08:15

4)



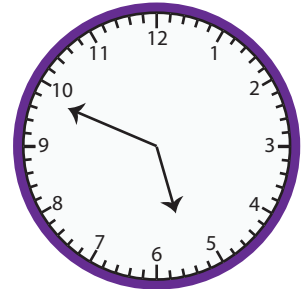
12:15

5)



03:30

6)



05:45

7)



02:30

8)



11:45

9)



04:15

10)



06:45

11)



09:15

12)



07:00