



Estimating Time

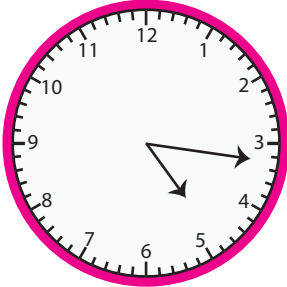
Name _____

Score _____

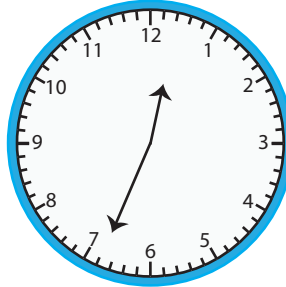
ET:07

Estimate the time by rounding the values to the nearest quarter hour.

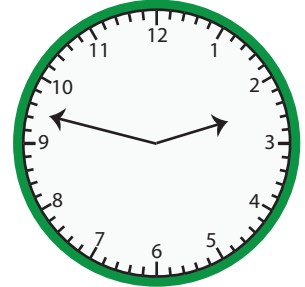
1)




2)



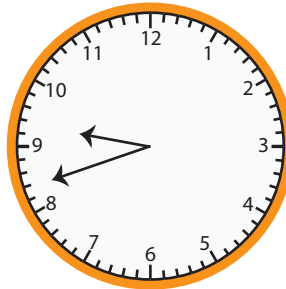
3)



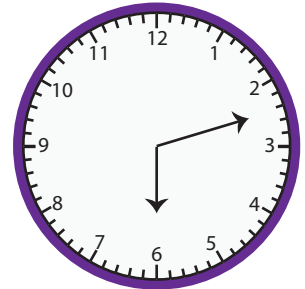
4)



5)



6)



7)



8)



9)



10)



11)



12)





Estimating Time

Name _____

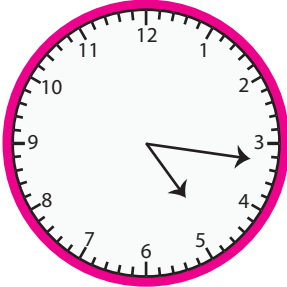
Score _____

Answer key

ET:07

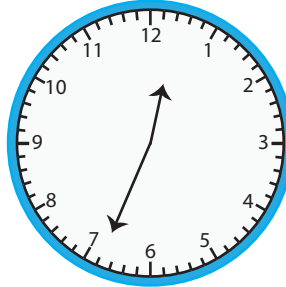
Estimate the time by rounding the values to the nearest quarter hour.

1)



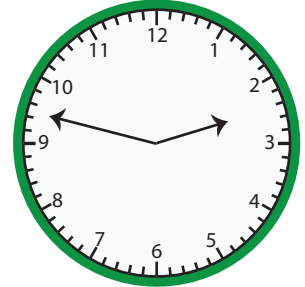
05:15

2)




12:30

3)



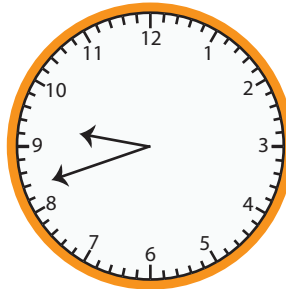
02:45

4)



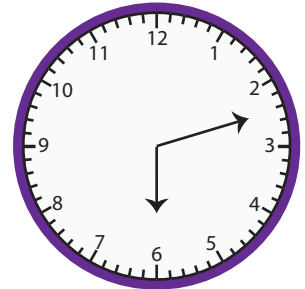
11:00

5)



09:45

6)



06:15

7)



07:45

8)



10:15

9)



01:00

10)



03:15

11)



05:30

12)



04:45