



Estimating Time

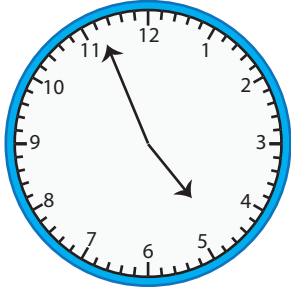
Name _____

Score _____

ET:03

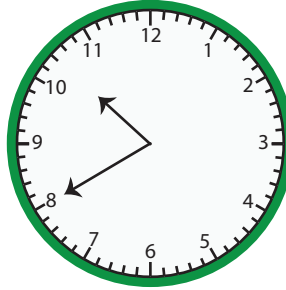
What is the time? Round to the nearest hour and write it down.

1)

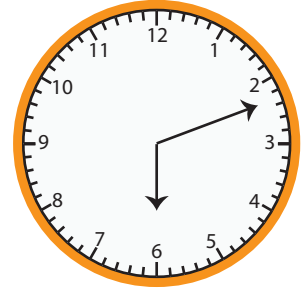


05:00


2)



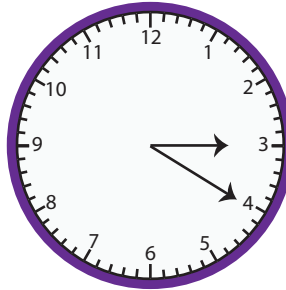
3)



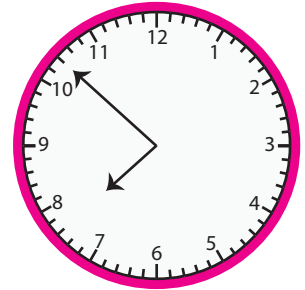
4)



5)



6)



7) 09:55

8) 07:11

9) 04:19

10) 11:48

11) 01:37

12) 09:12



Estimating Time

Name _____

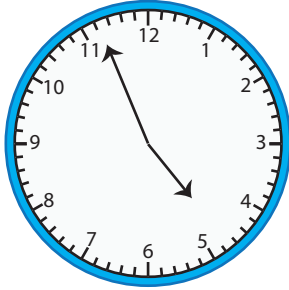
Score _____

Answer key

ET:03

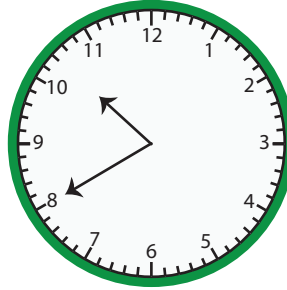
What is the time? Round to the nearest hour and write it down.

1)



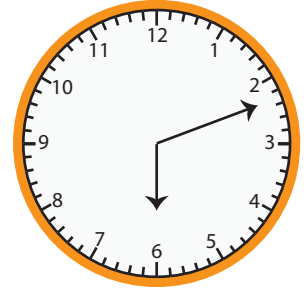
05:00

2)




11:00

3)



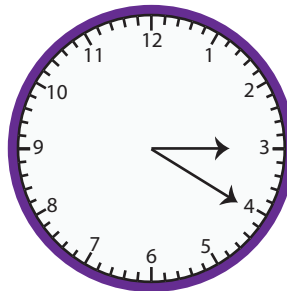
06:00

4)



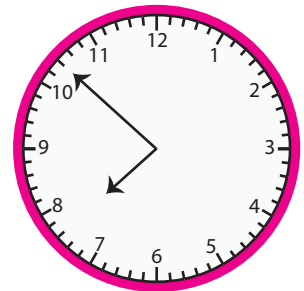
01:00

5)



03:00

6)



08:00

7) 09:55

10:00

8) 07:11

07:00

9) 04:19

04:00

10) 11:48

12:00

11) 01:37

02:00

12) 09:12

09:00